

BENCHMARK



HOLIDAY ASSIGNMENT GRADE ONE

VOL.3

STEP IN GRADE 2



LEARNER: _____

YEAR: _____

U.P.I. NO: _____

**BENCHMARK
HOLIDAY
ASSIGNMENT
GRADE
ONE
VOLUME THREE**

TABLE OF CONTENT

WEEK 1

SUBJECT	PAGE
MATHEMATICAL ACTIVITIES.....	3
LANGUAGE ACTIVITIES.....	6
SHUGHULI ZA KISWAHILI.....	10
ENVIRONMENTAL ACTIVITIES.....	14
CHRISTIAN RELIGIOUS EDUCATION	17
ISLAMIC RELIGIOUS EDUCATION.....	18

WEEK 2

MATHEMATICAL ACTIVITIES.....	19
LANGUAGE ACTIVITIES.....	22
SHUGHULI ZA KISWAHILI.....	25
ENVIRONMENTAL ACTIVITIES.....	29
CHRISTIAN RELIGIOUS EDUCATION.....	32
ISLAMIC RELIGIOUS EDUCATION.....	33

WEEK 3

MATHEMATICAL ACTIVITIES.....	34
LANGUAGE ACTIVITIES.....	37
SHUGHULI ZA KISWAHILI.....	40
ENVIRONMENTAL ACTIVITIES.....	43
CHRISTIAN RELIGIOUS EDUCATION.....	46
ISLAMIC RELIGIOUS EDUCATION.....	47

WEEK 4

MATHEMATICAL ACTIVITIES.....	48
LANGUAGE ACTIVITIES.....	51
SHUGHULI ZA KISWAHILI.....	54
ENVIRONMENTAL ACTIVITIES.....	57
CHRISTIAN RELIGIOUS EDUCATION.....	60
ISLAMIC RELIGIOUS EDUCATION.....	61

WEEK 5

MATHEMATICAL ACTIVITIES.....	62
LANGUAGE ACTIVITIES.....	63
SHUGHULI ZA KISWAHILI.....	64
ENVIRONMENTAL ACTIVITIES.....	65
CHRISTIAN RELIGIOUS EDUCATION.....	67
ISLAMIC RELIGIOUS EDUCATION.....	68

MATHEMATICS

WEEK 1


Draw number values


1. 4 =

2. 7 =

Count objects and match

3.  10

4.  3

5.  6

Write in words

6. 7 _____

7. 10 _____

Write the missing numbers

8. 11, 12, 13, ____, ____, 16, 17

9. 8, ____, 10, ____, 12

10. 15, 14, ____, 12, 11, ____

11. 64 is ____ tens ____ ones

12. 30 is ____ tens ____ ones

13. 7 tens 4 ones = ____

Add

14. $22 + 5 =$ ____

$$\begin{array}{r} 15. \quad 40 \\ + 30 \\ \hline \end{array}$$

16. Grade one Amani has 25 desks. Grade two Upendo has 30 desks. How many desks are there altogether? ____

Take away (-)

17. $18 - 5 =$ ____

$$\begin{array}{r} 18. \quad 90 \\ - 70 \\ \hline \end{array}$$


19. Peter had 18 pencils. He gave away 5 pencils. How many was he left with? ____

Fill in the sign "+" or "-"

20. $3 \text{ ____ } 5 = 8$

Write 'equal' or 'more than'

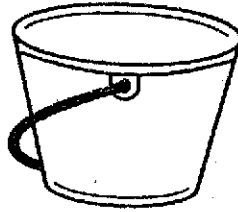
21. The cars are _____ the books.



22. The cups are _____ the balls.



23. Circle which holds more.



24. Name the shape.



25. Make a pattern using ○ and □



LANGUAGE ACTIVITIES

WEEK 1

A. Listening and speaking

I am going to ask you some questions and you will answer me. Let us talk about 'our classroom'.

- Name four things found in our classroom.
- How many pupils are in your classroom?
- Who is your leader in your class?
- What is the colour of your blackboard?

B. Reading aloud

Read the story below aloud.

Ben has a hen. The hen is big. The cat can see the hen. The cat runs after the hen. Ben is sad.

C. Comprehension

Read the story and answer the following questions

Everyday I woke up early in the morning. After waking, I wash my face, put on my uniform. I take breakfast and then I brush my teeth. I take my bag and go to school.

Write the things that this child does after waking up. (5 mks)

- _____
- _____
- _____
- _____
- _____

D. GRAMMAR

One

Many


1. Mango _____
2. Chair _____
3. Doctor _____

Fill in the gaps

4. gl ____ ss
5. t ____ ble
6. te ____ th
7. bro ____ m

Write the names of these pictures

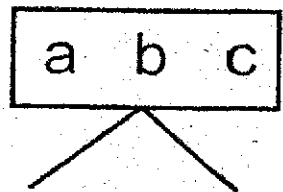
8.



9.



10.



11.



12.



Fill in the blanks using the words in brackets

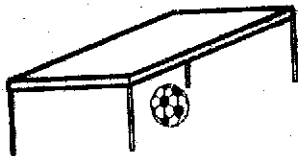
13. Take _____ pen to class. (your, bite)
14. I eat _____ and fish. (face, rice)
15. A dog can _____ you. (hug, bite)
16. I met a _____ ape. (huge, water)
17. I can wash _____ face. (your, my)

Write in capital letters


18. basket _____
19. house _____
20. cupboard _____
21. flower _____

Use 'on' 'in' 'under' to complete the sentences

22. The ball is _____ the table.



23. The milk is _____ the cup.



24. The bird is _____ the tree.



25. Make a sentence using the word 'Happy'

E. **Writing**

Write five words the teacher will give you.

1. _____
2. _____
3. _____
4. _____
5. _____

SHUGHULI ZA KISWAHILI

WIKI 1

A. Kusikiliza na kuzungumza

Nitakuuliza maswali kisha utanijibu. Tutazungumza kuhusu 'Rafiki yako'

- Hujambo?
- Rafiki yako anaitwa nani?
- Rafiki yako anasomea shule gani?
- Rafiki yako yuko gredi gani?
- Je, mnapenda kucheza mchezo gani ukiwa na rafiki yako?

B. Kusoma kwa sauti

Soma kifungu hiki kwa sauti

Mimi ni Juma. Rafiki yangu anaitwa Musa. Siku ya Jumamosi sisi hucheza pamoja. Leo tunacheza mchezo wa Kibe. Musa amefumba macho yake asione. Mimi ninakimbia ili nijifiche. Nimejificha nyuma ya kiti. Musa hajaniona.

C. Ufahamu

Soma kifungu kifuatacho kisha ujibu maswali

Tabitha aliamka saa moja asubuhi. Alimpata Joan akinywa chai. Joan alimwambia Tabitha achukue kikombe jikoni ili anywe chai. Baada ya kupata kiamshakinywa, walienda nje kucheza. Siku hiyo hawakuenda shuleni kwa sababu ilikuwa siku ya Jumamosi.

1. Tabitha aliamka saa ngapi? _____

2. Joan alikuwa anafanya nini? _____
3. Tabitha alipata kikombe wapi? _____
4. Baada ya kupata kiamshakinywa walienda wapi? _____
5. Kwa nini hawakuenda shuleni siku hiyo? _____

D. **Sarufi**

Unda maneno kwa kutumia silabi hizi

1. ka - _____
2. sh - _____
3. re - _____
4. pe - _____

Unganisha silabi ili kuunda neno

5. zo + e + zi = _____
6. ma + ma = _____
7. ki + fu + ti + o = _____
8. ra + fi + ki = _____

Andika kwa wingi

9. Kiti _____

10. Uzi _____

11. Jani _____

12. Mtoto _____

Andika tarakimu hizi kwa maneno ukitumia herufi ndogo

mf: 1 - moja

13. 8 _____


14. 5 _____

15. 4 _____

16. 10 _____

Andika kwa majina

17.




18.




19.



20.



21.



Andika kwa herufi ndogo

22. MTOTO _____
23. CHEZA _____
24. RAHA _____
25. KITANDA _____

E. Kuandika

Andika maneno yenye herufi 'k' katika kifungu hiki

Karimi ni msichana nadhifu. Yeye husoma katika gredi ya kwanza shuleni Matopeni. Mwalimu wake wa darasa ni Bi Amina. Kiranja wa darasa lake ni mvulana. Jina lake ni Karanja.

1. _____
2. _____
3. _____
4. _____
5. _____

ENVIRONMENTAL ACTIVITIES

WEEK 1

Environmental Activities

Name three materials we use to wash our body

1. _____
2. _____
3. _____

4. Dirty hair smells _____. (good, bad)

5. We use face towel to wipe water from our face _____.
(true, false)

6. Our ears have _____ and dust which makes them dirty.
(wax, feathers)

7. We clean our nose using a clean piece of _____.

Name the materials used to clean our home.

8.




9.



10.



11.



(bucket, dustpan, broom, mop)

12. We use a _____ to cut long grass in the compound.
(jembe, slasher)

13. We should avoid _____ on a slippery floor,
(walking, standing)

Name these family needs

BENCHMARK HOLIDAY ASSIGNMENT

Andika kwa herufi ndogo

22. MTOTO _____
23. CHEZA _____
24. RAHA _____
25. KITANDA _____

E. Kuandika

Andika maneno yenye herufi 'k' katika kifungu hiki

Karimi ni msichana nadhifu. Yeye husoma katika gredi ya kwanza shuleni Matopeni. Mwalimu wake wa darasa ni Bi Amina. Kiranja wa darasa lake ni mvulana. Jina lake ni Karanja.

1. _____
2. _____
3. _____
4. _____
5. _____

ENVIRONMENTAL ACTIVITIES

WEEK 1

Environmental Activities

Name three materials we use to wash our body

1. _____
2. _____
3. _____

4. Dirty hair smells _____. (good, bad)

5. We use face towel to wipe water from our face _____.
(true, false)

6. Our ears have _____ and dust which makes them dirty.
(wax, feathers)

7. We clean our nose using a clean piece of _____.

Name the materials used to clean our home.

8.




9.



10.



11.

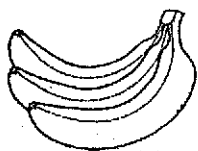


(bucket, dustpan, broom, mop)

12. We use a _____ to cut long grass in the compound.
(jembe, slasher)

13. We should avoid _____ on a slippery floor,
(walking, standing)

14.



15.



16.



17.



(clothes, water, bananas, sukumawiki)

18. Name the picture



Write true or false

19. We should observe the road signs before crossing the road. _____

20. We should be good to strangers on our way to school. _____

21. We buy meat from the _____. (market, butchery)

Name the things we see at the sky


22.



23.



24.



25.



26. _____ gives us light at night.

27. When it is too hot we drink a lot of _____. (juice, water)

Match the weather with name

28.



Calm

29.



Windy

30.



Rainy

CREATIVE ACTIVITIES

Draw these musical instruments that accompany singing

1. Shaker



2. Drum




3. Guitar




4. A dog makes sound by _____. (barking, mooing)

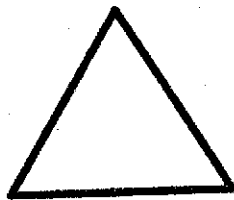
5. Draw the following signs
Zigzag line



6. Curved line



7. Colour and name the shape



8. When painting the National flag we should have _____
different types of colours. (4, 3)

9. Which body percussion does not accompany singing? _____
(shoulders, hands, ears)

10. When throwing and catching a ball, which part of the body do we
use? _____

CHRISTIAN RELIGIOUS EDUCATION

WEEK 1

1. Family is made up of father, mother and _____.
(people, children)
2. _____ is my Father in heaven.
(God, Teacher)
3. _____ is talking to God.
(playing, praying)
4. God created plants and _____.
(roads, animals)
5. The Bible is the word of _____. (father, God)
6. The Bible is divided into _____ parts. (4, 2)
7. Joseph was given a _____ by his father. (table, coat)
8. The brothers of Joseph _____ him. (loved, hated)
9. Elijah was taken to heaven with a chariot of _____.
(Angels, fire)
10. _____ killed Goliath. (Peter, David)

ISLAMIC RELIGIOUS EDUCATION

WEEK 1

1. Allah (SWT) loves people who do _____.
(bad, good)
2. Hadith is said by the _____.
(prophet, angel)
3. We should _____ our parents. (obey, hate)
4. We should _____ other people. (love, abuse)

Write true or false

5. Allah (SWT) sees everything we do _____
6. Allah (SWT) is our creator _____
7. We should _____ annoy others.
8. We only pray to Allah (SWT) _____
9. Islam teaches the importance of _____.
(cleanliness, dirty)
10. Cleanliness is part of _____. (faith, Iman)

MATHEMATICAL ACTIVITIES

WEEK 2

Count and write



Complete

4. 2, ____, 6, ____, 10

5. 5, ____, 15, ____, 25, ____

Add

6. $7 + 2 =$ _____

7. $0 + 3 + 3 =$ _____

8. $3 + 5 + 7 =$ _____

9.
$$\begin{array}{r} 6 \\ + 2 \\ \hline \end{array}$$

10.
$$\begin{array}{r} 8 \\ + 0 \\ \hline \end{array}$$

Take away

11.
$$\begin{array}{r} 8 \\ - 2 \\ \hline \end{array}$$

12.
$$\begin{array}{r} 9 \\ - 5 \\ \hline \end{array}$$

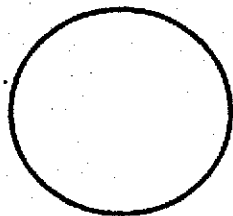
13. $15 - 5 =$

14. $10 - 7 =$

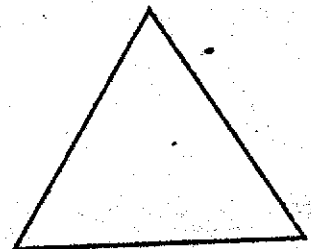
15. $5 - 0 =$

Name the shapes

16.



17.




18. Which is shorter?

A



B



19. Which is longer? _____

A 

B 

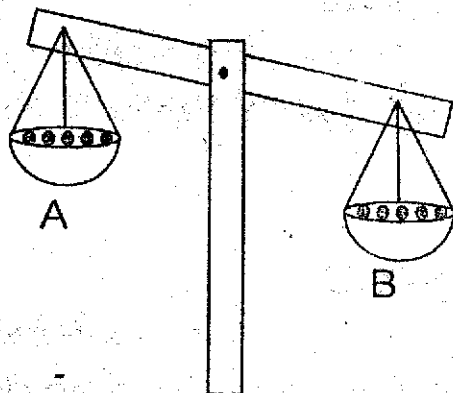
Write in words

20. 12 _____

21. 8 _____

22. 2 _____

23. Which one is heavier?



24. There are _____ days in a week.

LANGUAGE ACTIVITIES

WEEK 2

A. Listening and speaking (5 mks)

Answer the following questions teacher ask you orally

- a. At what time do you wake up?
- b) How is the weather today?
- c) What do we use to cut our nails?
- d) Which part of the bpdy do we use for seeing?
- e) Name any two family members.

Reading aloud

Read the passage a loud for your teacher

Amina is in the garden. She wants a flower. She picks a rose from a bush. She puts the rose near her nose. She says, "It smells nice."

COMPREHENSION

Read the story and answer the questions

Ali and Jane are in grade one. Ali has a bicycle. Jane has a bicycle too. They like riding. One day as they were riding, Ali had an accident. He broke his legs. His three friends visited him

1. _____ and _____ are in grade one.
2. Both Ali and Jane has _____
3. Who had an accident? _____
4. Ali and Jane likes riding _____

5. Ali broke his _____

Copy the words two times

6. Lamb _____

7. Mother _____

Add -ing

8. Read _____

9. Sleep _____

10. Jump _____

Match the pictures and names

11.




Chair

12.



Ball

13.



Cup

Fill in the blanks

14. b _ _ x

15. c _ _ t

16. g _ _ rl

Use 'am' or 'is'

17. This _ _ _ _ my pencil

18. I _ _ _ _ reading my book


Write in capital letters

19. teacher _ _ _ _ _


20. cupboard _ _ _ _ _

Draw and colour

21. House



22. Table



Write a word that starts with sound

23. b _____

24. P _____

25. My name is _____

Dictation

26. _____

27. _____

28. _____

29. _____

30. _____

SHUGHULI ZA KISWAHILI

WIKI 2

A. SEHEMU YA 1: Kusikiliza na kuzungumza

Mwalimu atamuuliza mwanafunzi maswali yafuatayo

1. Hujambo?
2. Jina lako ni nani?
3. Una umri wa miaka mingapi?
4. Taja siku tatu za wiki?
5. Mzazi wako wa kike huitwa?

B. Kusoma kwa sauti

Soma maneno haya

mama	moja	kijiko	meza	ukuta
tatu	saa	kalamu	ua	mpira

C. UFAHAMU

Sora ni msichana safi. Kucha zake ni ndefu. Yeye atakata kucha zake. Kucha ndefu hubeba uchafu. Uchafu huleta magonjwa. Sora hataki kuumwa na tumbo kwa sababu ta kula uchafu.

1. Sora ni msichana _____. (mchafu, safi)
2. Kucha za Sora ni _____. (fupi, ndefu)
3. Kucha ndefu hubeba nini? _____. (uchafu, safi)
4. Uchafu huleta _____. (afya, magonjwa)
5. Sora hataki kuumwa na _____. (mguu, tumbo)


D **SARUFI**

Andika kwa herufi kubwa


6. Mwalimu _____
7. Kiti _____
8. Mkulima _____
9. Kitabu _____
10. Mfereji _____

Chora picha za majina haya


11. Kiti




12. Kitabu



13. Kichana



14. Hanchifu



Jaza pengo

15. Mp __ ra
16. ta __ lo
17. ki __ tu
18. daw __ ti

Andika kwa wingi

19. Mtoto _____
20. Mzazi _____
21. Mgeni _____
22. Mwalimu _____

Ambatanisha nambari na maneno

23. 10 8
24. nane 7
25. saba kumi

E. KUANDIKA

Andika maneno utakayoambiwa na mwalimu

26. _____
27. _____
28. _____
29. _____
30. _____

ENVIRONMENTAL ACTIVITIES

WEEK 2


1. _____ is a source of water. (*tank, rain*)
2. We use _____ to keep water at home. (*tank, cup*)
3. A clean classroom is free from _____. (*healthy, diseases*)

4. Name three foods we get from the market.

- a) _____
- b) _____
- c) _____

5. Name the weather symbols







6. Stars give us _____ at night. (*light, heat*)

Name the items below.

7.



8.




9. We wear heavy clothes on a _____ day. (*hot, cold*)
10. We clean our _____ using an handkerchief. (*nose, eyes*)
11. We go to school to _____. (*pray, learn*)
12. It is a bad habit to eat fruits before _____. (*peeling, washing*)
13. _____ water is safe for drinking. (*boiled, lake*)


14. Babies have a set of teeth called _____ teeth. (milk, wisdom)
15. _____ is a type of medicine. (tablet, table)
16. We should _____ after using the toilet. (flush, nock)
17. Name two materials we can use to clean our feet.
 a) _____
 b) _____
18. What do we call food we eat in the morning? _____
 (breakfast, lunch)
19. A sick child has a right to be taken to _____. (home, hospital)

Draw and colour

20. Fish



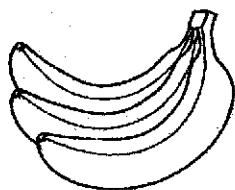
21. Egg



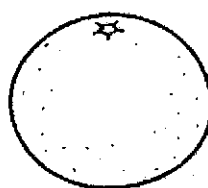
22. Our Kenya flag has how many colours? _____. (3, 4)

Name these fruits we eat


23.



24.



25.




CREATIVE ACTIVITIES

1. The Kenya National anthem has _____ verses. (4, 2, 3)
2. We put on _____ when performing singing games.
 (costumes, sticks)
3. Walking keeps the body _____. (safe, healthy)

4. Swinging hands helps to _____ the body when jumping high
(**drop, lift**)

5. Draw and colour a flag



6. _____ is the roughness or smoothness of a surface.
(**texture, line**)

7. Name the lines





8. We sing National anthem while _____
(**standing at attention, sleeping**)

9. Complete the pattern;



ABC

ABC


ABC

10. Colour the shapes

Red



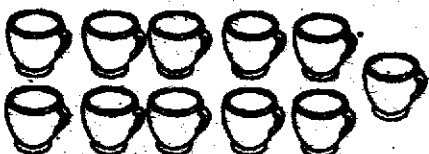
White



MATHEMATICAL ACTIVITIES

WEEK 3

Count and write how many?

1.  = _____

2.  = _____

How many tens and ones?

Number	Tens	Ones
E.g: 19	1	9
3. 5		
4. 33		
5. 40		

Write in words

6. 10 _____

7. 3 _____

8. 8 _____

Circle the less number

9. 31 or 12

Write the missing numbers

11. 10, 15, 20, _____, _____

12. 2, 4, 6, _____, _____

13. 40, 50, 60, _____, _____

Add

14. $4 + 3 + 1 =$

15. $43 + 20 =$

16.
$$\begin{array}{r} 70 \\ + 30 \\ \hline \end{array}$$

Subtract

17. $50 - 10 =$

✓ 18.
$$\begin{array}{r} 17 \\ - 9 \\ \hline \end{array}$$

19. Mary had 11 eggs. 7 of them broke. How many eggs remained?

20. Two dogs have _____ legs.

Measurement

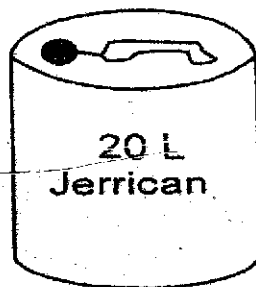
Write 'more than' or 'less than'

21.



The jug holds _____ the cups.

22.



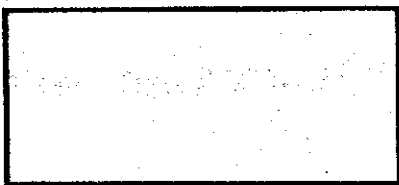
The bucket holds _____ the jerrican

23. Which day comes after Friday? _____

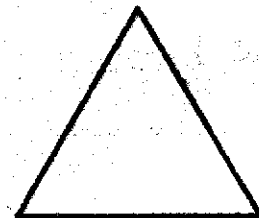
Geometry

Name the shapes

24.



25.



LANGUAGE ACTIVITIES

WEEK 3

A. Listening and speaking

The teacher will read for you the story and ask you some questions
Tom and Mat are in the park. Tam has a fish. Mat has a cake and a orange. They sit down under a tree and eat.

- a. Where were Tam and Mat? _____
- b. Who has a fish? _____
- c. Mat has two things, name them. _____
- d. Where did Tam and Mat sit? _____
- e. They sat down to _____

B. Reading Aloud

Read the story below aloud to your teacher

Mark has a pet. Its name is puppy. Puppy is black and white colour. Mark feeds his pet every morning and evening. He washed the pet every Sunday. Puppy is a happy pet.

C. Comprehension

Read the story and answer the questions



Caleb and his friends were taking care of the sheep on a weekend. The weather started changing. Before they arrived at home, started raining heavily. They waited for the rain to stop before going home. They were happy that it rained.

1. Who were taking care of the sheep? _____
2. When were they taking care of the sheep? _____
3. What started changing? _____

4. What happened before they arrived at home? _____

5. Why were they happy? _____

D. **Grammar**

Use 'is' 'are' to fill the gaps

1. It _____ a blue pen.

2. Sam and John _____ in the class.

3. They _____ reading.

4. This _____ my storybook.

Make words from the letter box below

t	l	s	p
a	e	o	i
h	g	m	n

5. _____

6. _____

7. _____

Name these pictures


8.




9.



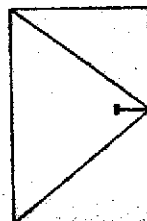
10.



11.



12.



Fill in the missing letters

13. b _ _ by

14. b _ _ _ k

15. tr _ _ _

16. dr ____ s

Write in plurals

17. flower _____

18. basket _____

19. box _____

20. man _____

Complete the sentences

21. _____ is a table. (*this, there*)

22. John _____ a boy. (*are, is*)

23. Those _____ oranges. (*are, is*)


Write in capital letters

24. cupboard _____

25. basket _____

E. Writing

Write five sentences about the animal below



26. _____

27. _____

28. _____

29. _____

30. _____

MATHEMATICAL ACTIVITIES

WEEK 4

Write in figures

1a) Twenty two _____

b) Eighteen _____

c) Twelve _____

2. Write in words

a) 9 _____

b) 116 _____

c) 30 _____

3. Take away

a) $30 - 10 =$ _____

b) $50 - 20 =$ _____

c)
$$\begin{array}{r} 14 \\ - 7 \\ \hline \end{array}$$

d)
$$\begin{array}{r} 17 \\ - 8 \\ \hline \end{array}$$

d)
$$\begin{array}{r} 90 \\ - 60 \\ \hline \end{array}$$

4. Fill in the gaps

a) $40 = \underline{\hspace{1cm}}$ tens $\underline{\hspace{1cm}}$ ones

b) $73 = \underline{\hspace{1cm}}$ tens $\underline{\hspace{1cm}}$ ones

c) 5 tens 8 ones = $\underline{\hspace{2cm}}$

5a)  $\underline{\hspace{1cm}}$ tens $\underline{\hspace{1cm}}$ ones

b)  $\underline{\hspace{1cm}}$ tens $\underline{\hspace{1cm}}$ ones

6. Add

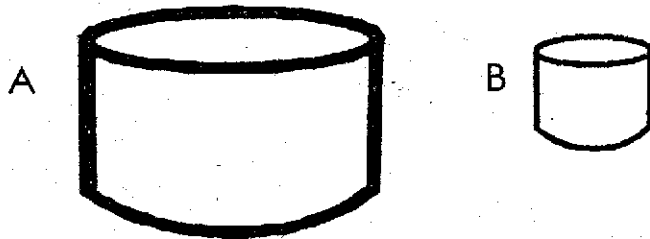
a) $20 + 10 = \underline{\hspace{2cm}}$

b) $30 + 20 = \underline{\hspace{2cm}}$



c) $7 + 4 + 3 = \underline{\hspace{2cm}}$

7. $\begin{array}{cccccc} \bigcirc & \bigcirc & \bigcirc & \bigcirc & \bigcirc & \bigcirc \\ \bigcirc & \bigcirc & \bigcirc & \bigcirc & \bigcirc & \bigcirc \end{array} - \begin{array}{ccc} \bigcirc & \bigcirc & \bigcirc \\ \bigcirc & \bigcirc & \end{array} = \underline{\hspace{2cm}}$

8. Which one holds more? $\underline{\hspace{2cm}}$



9. How much?

 
Sh 20 + sh 30 = $\underline{\hspace{2cm}}$

10. Fill in the missing numbers

35, 40, 45, $\underline{\hspace{1cm}}$, 55, $\underline{\hspace{1cm}}$

50, 40, 30, $\underline{\hspace{1cm}}$, $\underline{\hspace{1cm}}$

LANGUAGE ACTIVITIES

WEEK 4

A. Listening and speaking (5 mks)

Answer the following questions teacher ask you orally

- a. Name two parts of your body.
- b. Which part of the body is used to walk?
- c. Name two fruits you know.
- d. Name seven days of the week.
- e. How do you greet an elder person?

Reading Aloud

Read the passage aloud for your teacher

Ben has a cat. It likes to play. Ben plays with a cat. Tam has a dog. It likes to play. Tam plays with her dog. Ben and Tam play together. They share their toys too.

Comprehension

Read the story and answer the questions

My name is Ochieng. I am a grade one pupil at Joseph Kang'ethe Primary School. My father is a teacher. My mother is a doctor. She works in hospital. I visit my grandmother when school close. My grandmother uses a stick to walk. I love my family.

1. In which grade is Ochieng ? _____
2. Ochieng's father is a _____.
3. Ochieng's mother works in _____
4. A doctor treats sick _____. (people, animals)
5. Ochieng's grandmother uses a _____ to walk.

Write plurals of the following

- i) Doctor _____
- ii) Brother _____
- iii) Ball _____

iv) Class _____

Fill in the missing sounds

i) t ____ ble

ii) g ____ rl

iii) r ____ t

iv) h ____ use

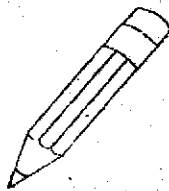
v) c ____ p

Name the pictures

a)



b)



c)



Write in capital letters

a) dirty _____

b) night _____

c) house _____

d) soap _____

e) teacher _____

Use 'a' or 'an'

a) _____ cup

b) _____ apple

- c) _____ ox
d) _____ umbrella
e) _____ pen

Add -ing

- a) Walk _____
b) Draw _____
c) Eat _____
d) Clean _____

Add -ed

- a) Brush _____
b) Play _____
c) Close _____
d) Pray _____

Write five sentences about yourself

1. _____
2. _____
3. _____
4. _____
5. _____

- iii) Mguu _____ unauma. (wangu, yetu)
- iv) Mtoto _____ anacheza. (wetu, chetu)

Unda maneno matatu kwa jedwali

ki	ma	ho
m	go	ti
ba	sa	ga

1. _____
2. _____
3. _____

Tumia 'nina' au 'tuna'

- a) Sisi _____ cheza.
- b) Mimi _____ soma.

Andika sentensi tano kuhusu mwalimu wako

1. _____
2. _____
3. _____
4. _____
5. _____


ENVIRONMENTAL ACTIVITIES

WEEK 4

Environmental Activities (30 mks)

1. Sky is colour _____. (red, blue, white)

2. Name the weather symbols.



3. We go to hospital when we are _____. (well, sick)

4. Mother, father and children are _____ family.
(nuclear, parents)

5. We get milk from _____. (hen, cow, cat)

6. Name two uses of water.

- i) _____
- ii) _____

7. Urinals are used by _____. (girls, boys)

8. We cook food in the _____. (kitchen, bedroom)

9. A small baby has _____ teeth. (0, 4)

10. People use umbrella during _____ season. (rainy, cloudy)

11. Name two sources of water.

- i) _____
- ii) _____

12. Soil is used to _____. (model, cooking)

13. Name two plants found in your school.

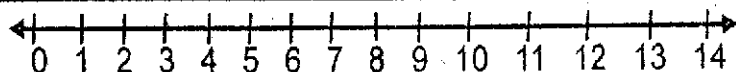
- i) _____
- ii) _____

14. We use _____ to clean our nose. (handkerchief, towel)

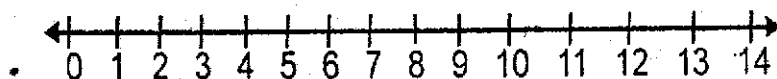
MATHEMATICAL ACTIVITIES

WEEK 5

1. Use numberline to add and subtract numbers



$$11 - 6 = \underline{\quad}$$



$$5 + 7 = \underline{\quad}$$

2. Match the numbers

a) 6 000000000000

b) 9 $\triangle \triangle \triangle \triangle \triangle \triangle \triangle$

c) 11 0000000000

3. Use 'fewer than' 'more than' or 'same as'



The balls are _____ the trees.

4. There are _____ months in a year. (7, 12)

5. Add (+)

(a) $10 + 4 = \underline{\quad}$

(b) $3 + 6 = \underline{\quad}$

6. Take away (-)

(a) $9 - 2 = \underline{\quad}$


(b) $6 - 3 = \underline{\quad}$

LANGUAGE ACTIVITIES

WEEK 5


1. Match name with pictures

a)



Rubber

b)



Ruler

c)



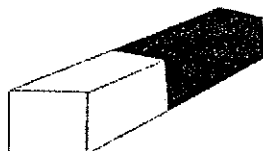
Bucket

d)



Flower

e)



Leaf

2. Fill in the blanks

a) Keep the classroom cl ____an

b) Use w ____t____r well all the time

c) Do not misuse your b ____ ____ks

d) Do not throw f ____ ____d

e) Switch off the l ____gh ____s

CHRISTIAN RELIGIOUS EDUCATION

WEEK 5

1. I am a child of _____ (father, God)
2. I am a _____ (boy, girl)
3. _____ created us. (Satan, God)
4. _____ and _____ are parents of Jesus.
(Mary, Zacharia, Joseph)
5. Draw things that God created.

Tree	Sun	Rain	Man
6. _____ had a coat of many colours.
(Jesus, Daniel, Joseph)
7. Naaman was healed by prophet _____
(Isaiah, Elisha, Elijah)
8. The boys who laughed at prophet Elisha were eaten by _____
(fire, bears, lions)
9. Jesus was born during the reign of king _____
(Solomon, Herod, Isaiah)
10. When Jesus was born he was laid on a _____ and the first people to see baby Jesus were _____
(shepherds, baby cot, wisemen, manger)

ISLAMIC RELIGIOUS EDUCATION

WEEK 5

1. When taking udhu washing the face is _____.
(*faradh, sunnah,, makruh*)
2. _____ was the uncle of the prophet (SAW).
(*Abu Musa, Abu Twalib, Abu Kaaba*)
3. Muslims say _____ after eating.
(*Allahu Akbar, Subhanallah, Alhamdullilah*)
4. Muslims should not drink using _____ cups.
(*gold, plastic, wooden*)
5. Allah wants the muslims to slaughter an animal during _____.
(*Friday, birthday, Idd day*)
6. The word Kawthar means _____.
(*peace, abundance, stealing*)
7. The kaaba was first built by _____.
(*Nuh, Swalah, Adam*)
8. Those who do not pray at the right time are mentioned in suratul _____.
(*Fiyl, Kawthar, Maun*)
9. We should _____ our parents.
(*hate, love, annoy*)
10. There are _____ takbiras in the second rakaa of swalatul Idd.
(*two, five, seven*)

OTHER BOOKS IN THE MARKET

Revision Books Grade 1

Revision Books Grade 2

Revision Books Grade 3

Revision Books Grade 4

Revision Books Grade 5

Revision Books Grade 6

Revision Books Grade 7

Revision Books Class 8

K.C.P.E Booster Class 8

Mathematics Formula

BENCHMARK
Kagondo House
Sheikh Karume Road
Nairobi- Kenya
ndambiri93@gmail.com