

GRADE 1 END OF YEAR

HOLIDAY ASSIGNMENT BOOKLET

VOLUME 1-5 {ALL SUBJECTS}

A Series of Assessment Questions Ranging from volumes 1-5 & Covering the whole Syllabus as per the curriculum.

FOR MORE MARKING SCHEMES:

Contact : Mr Machuki

0724333200/0795491185/0768321553

Email us on kenyaeducators@gmail.com

Or

Visit our website:

www.kenyaeducators.co.ke

KENYA EDUCATORS CONSULTANCY

VOLUME 1
{ALL SUBJECTS}
QUESTIONS

Contact Kenya Educators Consultancy

0724333200/ 0795491185

**For Marking Schemes and More
Revision Materials During the Long
Holidays**

Happy Holidays!!!

#KENYA EDUCATORS CONSULTANNCY

NAME.....

GRADE 1 END OF YEAR
HOLIDAY HOMEWORK BOOKLET
VOLUME 1
ENGLISH
GRADE 1
TERM 3

Read the following comprehension and then answer questions that follow.

Ben is a boy. He is in grade one. He likes putting on black shoes. His friend is called Hilary. They like playing football. Ben has a green ball. They always kick the ball in the field after school.

When they are tired, they go home to rest. At home, they drink pineapple juice. The juice has sweet taste. Ben and Hilary are obedient boys.

1. Ben is a friend to _____
2. What is the colour of Ben's shoes? _____
3. Ben and his friend like playing _____
4. Where do the boys kick the ball? _____
5. Which fruit gave the boys juice? _____
6. Ben and Hilary are _____ boys.

TASK 4: GRAMMAR**Name the pictures below**

1.



h _ _ _

Write words in small letters

3. HEAD - _____
4. SOAP - _____
5. DOG - _____

Write in pluralonemany

6. chair _____
7. Egg _____

Fill in the blanks spaces

8. G _ _ rl
9. Ho _ _ se

Use "a" or "an"

10.

_____ umbrella

11.

_____ cup

Use "is", "are" or "am"

12. That _____ my pencil.
13. I _____ in grade one.
14. Nevine and Lenox _____ friends.

Write the words well

15. llba - _____

16. puc - _____

17. gge - _____

Add-ing

18. go - _____

19. cry - _____

20. write - _____

Match the opposite word

21. Boy write

22. Go girl

23. Read come

TASK 5: WRITING

Dictation

24. _____

25. _____

26. _____

27. _____

28. _____

NAME.....

GRADE 1 END OF YEAR
HOLIDAY HOMEWORK BOOKLET
VOLUME 1
INTEGRATED LEARNING AREAS
(Environmental Activities & Creative arts and
Religious Activities)
GRADE 1
TERM 3 2023

TASK 1: ENVIRONMENTAL ACTIVITIES

Name the weather symbols

1.



2.



(star, rain, calm)

3.

_____ is a source of water. (Hill, Pipe, Rain)


4. This pot is made from _____ soil. (sandy, clay)



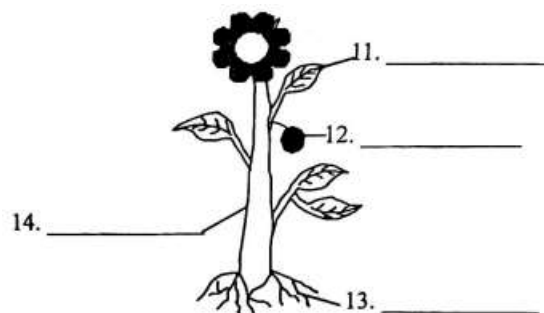
5. A _____ is a wild animal. (cat, monkey, hen)
6. Loud sound is not good for our _____ (eyes, mouths, ears)
7. Hen gives us _____ and meat. (milk, eggs, hair)
8. This gives us light at night. It is a _____ (sun, moon, star)



9. All cows eat _____ (grass, meat, rice)
10. Draw and colour a tree in your school



Name the parts of a plant



(Root, fruit, leaf, stem)

15. _____ is a child right. (Watch, Education, Television)

TASK 2:

Name the fruits

1.

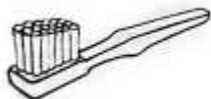


2.



(orange, carrot, banana)

3. This is a _____




(comb, toothbrush)

4. I have _____ eyes to see.

(2, 4, 6)


5. Draw and colour an egg



6. The first set of teeth are called _____ teeth.
(**good, weak, milk**)
7. Dirty hair have _____ (**jigger, lice, bees**)
8. A ripe banana tastes _____ (**sour, salty, sweet**)
9. We should _____ drinking water. (**cooked, wash, boil**)
10. Too much food in the mouth can _____ us. (**burn, choke, fall**)
11. The time to eat is called _____ time. (**break, sleep, meal**)
12. A watermelon is a _____ (**vegetable, fruit, root**)

TASK 3:

1. A _____ produces sound by hitting. (**guitar, drum, horn**)
2. _____ sound can spoil our ears. (**soft, loud**)
3. A hug is a sign of _____ (**fight, love, war**)
4. **Draw and colour a pot**

**TASK 4: CHRISTIAN EDUCATION ACTIVITIES**

1. _____ killed Goliath. (**Samson, David, Moses**)
2. _____ your father and mother. (**Beat, Respect**)
3. Jesus was invited for a wedding at _____ of Galilee
(**Canaan, Cana**)
4. Jesus was baptised in River _____ (**Jordan, Nile**)
5. _____ was born in Bethlehem. (**John, Jesus, God**)
6. Prophet _____ was taken to heaven by a chariot.
(**Elisha, Elijah**)
7. Joseph had _____ dreams (**2, 3, 4**)

8. Mathew and _____ are the first books in the New Testament. (**Luke, Mark, John**)

TASK 4. ISLAMIC RELIGIOUS ACTIVITIES

1. Fill in the missing letters
 - a. Q__r__n
 - b. All__h
2. Where do Muslims go for prayers? _____ (**church, mosque**)
3. Where do Muslims go for hajj? _____ (**Makkah, Madina**)
4. How many pillars of Islam do we have _____ (**5, 10**)
5. Who is your God _____ (**Musa, Ibrahim, Allah**)
6. When was prophet Muhammad S.A.W born _____ (**Rabul Awwal, Shaban**)
7. Who was the mother of prophet Muhammad S.A.W _____ (**Khadija, Amina**)
8. After eating we must say _____ (**Thank you, Alhamdulillah**)
9. Before eating we must _____ our hands. (**wash, wipe**)
10. Injil was given to which prophet of Allah S.W.T _____ (**Issah, Musa**)

NAME.....

GRADE 1 END OF YEAR
HOLIDAY HOMEWORK BOOKLET
VOLUME 1
KISWAHILI
GRADE 1
TERM 3

Soma hadithi ifuatayo kisha ujibu maswali

Hawa ni wanafunzi wa gredi ya kwanza. Wako darasani. Mwalimu wao anaitwa Bi. Kazungu. Wanafuzi wanasoma vitabu. Mwalimu anawafundisha. Mwalimu anaandika ubaoni akitumia chaki. Wanafunzi wanatumia kalamu kuandikia vitabuni.

1. Taja vitu vitatu vinapatikana darasani.
 - a. _____
 - b. _____
 - c. _____
2. Hawa ni wanafunzi wa gredi ya _____
3. Mwalimu wao anaitwa Bi _____
4. Mwalimu anaandika ubaoni akitumia _____
(kalamu, chaki)
5. Wanafunzi wanafanya nini? _____
6. Chora kalamu



SEHEMU YA 4: SARUFI**Jaza pengo**

1.
mez_____
2.
k____su
3.
mt_____

Andika kwa maneno au nambari

4. Tisa - _____
5. 8 - _____

Andika kwa wingi

6. mdomo _____
7. jicho _____

Tumia "huyu" au "hawa"

8. Wanafunzi _____
9. Baba _____

Andika kinyume cha maneno haya

10. Keti _____
11. Shuka _____

Andika kwa herufi kubwa

12. meno _____
13. cheti _____

Kamilisha sentensi zifuatazo

14. Jina langu ni? _____
15. Mama yangu anaitwa? _____
16. Mzazi wangu wa kiume nitamwita _____ (babu, baba)

17. Chora paka



NAME.....

GRADE 1 END OF YEAR
HOLIDAY HOMEWORK BOOKLET
VOLUME 1
MATHEMATICS
GRADE 1
TERM 3

Count and write how many?

1.



= _____

2.



= _____

Write in words or numbers

3. Eleven = _____

4. 8 = _____

Write in words or numbers

5. 16, 17, 18, _____, _____

6. 13, 12, 11, _____, 9

Add

7. $4 + 5 =$

8. $3 + 1 + 2 =$

Add

9.
$$\begin{array}{r} 20 \\ +30 \\ \hline \end{array}$$

10.
$$\begin{array}{r} 15 \\ + 2 \\ \hline \end{array}$$

Place value

11. $37 =$ _____ tens _____ ones.

12. _____ = 1 tens 6 ones.

Take away

13. $12 - 7 =$

14. _____ $- 5 = 2$

Write the missing numbers

15. $+ 8 = 9$

16. $5 + = 8$

17. 13 take away 6 =

18. A cow has _____ horns.

Count forward by 5

19. 15, _____, 25, 30, 35.

20. 20, 25, 30, _____, 40.

21. There are 60 pupils in grade 1. Girls are 40. How many are boys?

Work out

$$\begin{array}{r} 22. \quad 3 \\ +2 \\ \hline 2 \\ \hline \end{array}$$

$$\begin{array}{r} 23. \quad 17 \\ -12 \\ \hline \\ \hline \end{array}$$

24. Which day is missing?

Wednesday, _____, Friday. (**Monday, Thursday**)

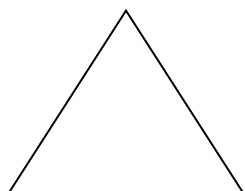
25. A bucket has _____ water than a cup.

(**less, more**)


26. One week has _____ days (**7,8**)

Name the shapes

27.



28.



(**Circle, Triangle, Oval**)

VOLUME 2
{ALL SUBJECTS}
QUESTIONS

Contact Kenya Educators Consultancy

0724333200/ 0795491185

**For Marking Schemes and More
Revision Materials During the Long
Holidays**

Happy Holidays!!!

#KENYA EDUCATORS CONSULTANNCY

NAME.....

GRADE 1 END OF YEAR
HOLIDAY HOMEWORK BOOKLET
VOLUME 2
ENGLISH
GRADE 1
TERM 3

Task 1: COMPREHENSION. (10mks)

1. **Read the story below and answer the questions that follow.(5mks)**

Jane looked at his fingers. Her fingernails were long. She looked for a nailcutter and asked her mother to cut her fingernails because she did not want to hurt her fingers. Jane knew that short fingernails do not keep germs.

- a. Whose fingernails were long?

- b. What did she look for to cut her fingernails?

- c. Who cut her fingernails?

- d. Why did she not cut her fingernails?

- e. Short fingernails do not keep

2. **Read the story below and answer the following questions (5mks)**

On Saturday we helped our parents with work at home. Otieno wiped the table. Akinyi swept the house, collected the rubbish and put in the bin. Their mother was very happy.


a. On which day did these children help their parents?

b. What did Otieno do?

c. What did Akinyi do?

d. Where did she put the rubbish?

e. Draw a dustbin'



Task 2: GRAMMAR. (15mks)

1. Write these words in small letters (5mks)

- a. CLEAN-----
- b. KITE-----
- c. LION-----
- d. GRASS-----
- e. JEMBE-----

2. Fill in the gaps with a, e, i, o, u. (5mks)

- a. r_in
- b. t_ble
- c. b_k

- d. sp _ _n
e. d _ ck
3. Write these words well (5mks)
- a. doow
b. bew
c. oatg
d. keca.....
e. ourf

Task 3: WRITING**(10mks)****Dictation****Write ten words that your teacher will read for you.**

1.
2.
3.
4.
5.
6.
7.
8.
9.
10.

NAME.....

GRADE 1 END OF YEAR
HOLIDAY HOMEWORK BOOKLET
VOLUME 2
INTEGRATED LEARNING AREAS
(Environmental Activities & Creative arts and
Religious Activities)
GRADE 1
TERM 3

-
1. John put a lot of food in his mouth. He talked while eating. What do you think happened to John? He was
(choked, cut, suffocated) (1mk)
 2. If you play with a knife you can easily your fingers.
(fall, cut, burn (1mk)
 3. Look at the boy below



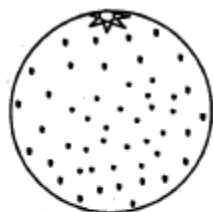
What accident is likely going to happen to the boy?(1mk)

.....

4. When served with food you should say (1mk)
(sorry, thank you, please)
5. We should eat with our mouth(1mk)
(closed, open)
6. We buy meat from a (1mk)
(butchery, shop, kitchen)
7. We buy cooked food from a(1mk)
(hotel, butchery, shop)
8. Say places where these foods are sold (4mks)



9. Colour these fruits (4mks)



ENVIRONMENTAL ACTIVITIES. (15mks)

1. ' Say who these people are as a way of making money in the family (8mks)



2. Children have a right to (1mk)
(fight, learn, cry)
3. Draw these furniture. (2mks)

a. Table



b. Chair



CRE ACTIVITIES. (10mks)

1. Who healed Simon Peter's mother-in-law? (God, Jesus, John) (1mk)
2. Jesus attended the wedding at Cana of (Jerusalem, Jericho, Galilee) (1mk)
3. Jesus attended the wedding with his and (2mks)
4. Jesus asked the servants to fill jars with water.(4, 3, 6) (1mk)
5. Jesus changed water into (wine, milk, blood) (1mk)
6. Who baptised Jesus? (1mk)
7. Where was Jesus baptised? In river (Tana, Jordan, Athi)(1mk)
8. If we do not obey we make God (1mk) (happy, excited, unhappy)
9. How old was Jesus when they went for the festival for passover in the temple?years old. (12, 11, 10) (1mk)

IRE ACTIVITIES. (10mks)

1. The angel who brought the Qur'an was (Jibril, Ridhwan)
2. Amul fiil means the year of (camels, elephants)
3. The king of Yemen was (Abraha, Ibrahim)
4. The Kaabah is found in (Madina, Makkah)
5. Surah Al-Fatiha has verses. (seven, eight)

6. Prophet Mohammad was born in the year of (Cows, Elephants)
7. Swalatul subh has rakaat. (three, two)
8. Muslims worship in the (church, mosque)
9. The prophet (S.A.W) was born on a (Monday, Friday)
10. The mother of the prophet was (Amina, Halima)

CREATIVE ACTIVITIES. (10mks)

1. We a rope. (skip, swim, kick) (1mk)
2. We clap our when singing. (legs, hands, head) (1mk)
3. The baby is crying. He wants to sleep. I will sing for him a song. (sacred, lullaby, patriotic) (1mk)
4. Complete this line of the National Anthem (2mks)
Ee nguvu

NAME.....

GRADE 1 END OF YEAR
HOLIDAY HOMEWORK BOOKLET
VOLUME 2
KISWAHILI
GRADE 1
TERM 3

1. **UFAHAMU** (Alama 10)

Soma hadithi ifuatayo kisha ujibu maswali yanayofuata: (Alama 5)

Maria na Asha walikuwa marafiki. Walipendana sana. Walienda shuleni pamoja. Walikuwa watoto wenye heshima na wenye bidii sana. Walimu waliwapenda kwa tabia zao nzuri.

- a. Ni nani walikuwa marafiki? (alama 2)

- b. Walikuwa na tabia gani? (alama 1)

- c. Ni nani aliwapenda? (alama 1)

- d. Walienda wapi pamoja? (alama 1)

2. Soma hadithi ifuatayo kisha ujibu maswali (alama 5)

Tom aliamka saa moja asubuhi. Alimpata Joan akinywa chai. Joan alimwambia Tom achukue kikombe jikoni ili anywe chai. Baada ya kupata kiamshakinywa walienda nje kucheza. Hawakuwa waende shuleni maana ilikuwa siku ya Jumamosi.

a. Tom aliamka saa ngapi?

b. Joan alikuwa anafanya nini?

c. Tom alipata kikombe wapi?

d. Baada ya kiamshakinywa walienda wapi?

e. Kwa nini hawakuenda shuleni?

2. SARUFI (alama 20)

1. Tenganisha silabi

a. Maua =

b. Pole =

c. Dawati =

d. Kiti =

e. Moja =

3. KUANDIKA. (Alama 10)

Andika maneno 10 utakayosomewa na mwalimu

- a.
- b.
- c.
- d.
- e.
- f.
- g.
- h.
- i.
- j.

NAME.....

GRADE 1 END OF YEAR
HOLIDAY HOMEWORK BOOKLET
VOLUME 2
MATHEMATICS
GRADE 1
TERM 3

Write in words (6 marks)

1. 9 _____
2. 1 _____
3. 8 _____
4. 15 _____
5. 12 _____
6. 5 _____

Fill in the missing numbers(6 marks)

7. 2 4 6 _____
8. 50 51 52 _____
9. 10 20 30 _____

Put together (6 marks)


Contact 0724333200/0795491185 for marking schemes or order online at
www.kenyaeducators.co.ke

10.



$$\underline{\hspace{2cm}} + \underline{\hspace{2cm}} =$$

11.



$$\underline{\hspace{2cm}} + \underline{\hspace{2cm}} =$$

12.



$$\underline{\hspace{2cm}} + \underline{\hspace{2cm}} =$$

Write tens and ones

13. $12 = \underline{\hspace{1cm}}$ tens $\underline{\hspace{1cm}}$ ones

14. $43 = \underline{\hspace{1cm}}$ tens $\underline{\hspace{1cm}}$ ones

15. $26 = \underline{\hspace{1cm}}$ tens $\underline{\hspace{1cm}}$ ones

Work out

$$\begin{array}{r} 20 \\ +30 \\ \hline \end{array}$$

$$\begin{array}{r} 83 \\ +15 \\ \hline \end{array}$$

22. $16+5=$

23. $10+3=$

24.
$$\begin{array}{r} 55 \\ +33 \\ \hline \end{array}$$

25.
$$\begin{array}{r} 69 \\ -25 \\ \hline \end{array}$$

26. $20-9=$

27. $18-2=$

28. $4+4+2=$

Arrange the numbers from the smallest to the largest

29. 5 4 6 2 1 3 -----

30. 12 8 6 2 4 -----

31. 30 40 20 50 10-----

Work out

32. $6 + \underline{\quad} = 12$

33. $4 + \underline{\quad} = 10$

34. $8 + \underline{\quad} = 8$

35. $5 - \underline{\quad} = 3$

Match with the correct answer

36. $4+4=$ 9

37. $5+10=$ 5

38. $6+3=$ 15

39. $7-2=$ 8

VOLUME 3
{ALL SUBJECTS}
QUESTIONS

Contact Kenya Educators Consultancy

0724333200/ 0795491185

**For Marking Schemes and More
Revision Materials During the Long
Holidays**

Happy Holidays!!!

#KENYA EDUCATORS CONSULTANNCY

NAME.....

GRADE 1 END OF YEAR
HOLIDAY HOMEWORK BOOKLET
VOLUME 3
ENGLISH
GRADE 1
TERM 3

Task : **COMPREHENSION**

Tom and Tam are at home.

Tom and Tam play.

Tom has a ball, Tam has a rope. They are happy.

Answer the following questions

1. Tom and Tam are at _____
2. Tom has a _____
3. Tom and Tam are _____

TASK 4: **GRAMMAR**

1. **Dictation**
 - a. _____
 - b. _____
 - c. _____
2. **Fill in the missing letters**

- a. b_____y
- b. B_____k
- c. L_____g

3. **Name the pictures**



(ball, hen)

4. **Write the words that begins with the following sounds**

- a. d
- b. s
- c. m

NAME.....


**GRADE 1 END OF YEAR
HOLIDAY HOMEWORK BOOKLET
VOLUME 3**

**INTEGRATED LEARNING AREAS
(Environmental Activities & Creative arts and
Religious Activities)**

**GRADE 1
TERM 3**


ENVIRONMENTAL ACTIVITY

1. Match the objects with the time



2. Name the following weather conditions

a.



b.



c.

**(Rainy, Windy, Sunny)**

3. Name three sources of water

a. _____

b. _____

c. _____

4. _____ and _____ are plants found at home.

HYGIENE AND NUTRITION1. **Healthy or not healthy**a. Eating chips _____ (**healthy,**
not healthy)b. Drinking water _____ (**healthy,**
not healthy)2. Teeth that we remove are called _____ teeth.
(**milk, good**)3. We wash our _____ before removing teeth
(**hands, mouth**)4. _____ is a form of medicine. (**Sweet, Tablet**)5. We use toothpaste and _____ to clean our
teeth. (**toothbrush, toothpaste**)6. We use _____ to smell. (**ears, nose**)

7. I see with my _____ (mouth, eyes)

CHRISTIAN RELIGIOUS ACTIVITY

1. _____ created me. (Satan, God)
2. My name is _____
3. Draw the following

tree	sun

4. The Bible is the word of _____ (God, people)
5. _____ killed Goliath. (David, Joseph)

ISLAMIC RELIGIOUS ACTIVITIES

Fill in the missing letters

1. Ghaf_____r
2. Rahm_____n
3. R_____jab

Answer the following

1. Who created you _____
2. The Quran is the Holy Book of the _____
3. There are _____ pillars of Islam. (4; 5)
4. Jibril is the Angel of _____
5. _____ is the place of worship. (House, Mosque, Kitchen)
6. We believe that Allah is _____ (3, 1, 2)

7. Aminah was the mother of Nabii _____ (Issa, Muhammad)

MOVEMENT ACTIVITY

1. Draw a straight line.



2. Draw and Colour the leaf



3. We skip using a _____. (ball, rope)

NAME.....

GRADE 1 END OF YEAR
HOLIDAY HOMEWORK BOOKLET
VOLUME 3
KISWAHILI
GRADE 1
TERM 3

UFAHAMU

Soma kifungu kifuatacho kisha ujibu maswali yafuatayo

Tai anakaa mtini.

Paka anakaa na kuku kitini.

Paka na kuku wanacheza.

1. Tai anakaa wapi _____
2. Paka na kuku wanakaa wapi _____
3. Nani wanacheza _____

SEHEMU YA NNE: SARUFI

1. **Imla**

- a.
- b.



2. **Jaza pengo**

a. mp_____ra

b. k_____ti

c. g_____ti

3. **Chora picha hizi**

	
kitabu	mti

4. Andika kwa nambari

Saba _____

tano _____

NAME.....

**GRADE 1 END OF YEAR
HOLIDAY HOMEWORK BOOKLET**

VOLUME 3

MATHEMATICS

GRADE 1

TERM 3

1. Count and write how many (4mks)




2. Write the missing numbers (3mks)

a. 66, 67, __, __, 70


b. 19, __, __, __, 23, 24

c. 27, __, 29, __, 31

3. Write the numbers in figures (4mks)

- a. Twenty one-----
b. Seven-----
c. Thirteen-----
d. Fifty six-----
4. Complete the following (4mks)
a.
- 
- ___Tens, ___ones = ___
- b. $32 = \text{___tens and ___ones.}$
c. $21 = \text{___tens and ___ones.}$
d. $4 = \text{___tens and ___ones.}$
5. Work out (4mks)
a. $3 + 4 + 4 =$
b. $8 + 1 =$
c. $6 + 0 =$
d. $2 + 3 + 4 =$
6. Add (4mks)
a. $40 + 30 =$
b. $50 + 10 =$
c. $3 + 3 + 6 =$
d. $12 + 14 =$
7. Fill in the boxes (2mks)
a. $8 + \text{___} = 12$
b. $\text{___} + 8 = 10$
8. Take away (5mks)
a. $42 - 31 =$
b. $13 - 5 =$
c. $18 - 8 =$
d. $15 - 3 =$
e. $12 - 6 =$
9. What is 16 take away 9?
10. Subtract 8 from 20
11. Mark had 6 mangoes. He ate two mangoes. How many mangoes remained?(1mk)
12. Which one holds more? (1mk)

13. How much money? (3mks)



14. Which line is shorter (1 mks)

A _____

B _____

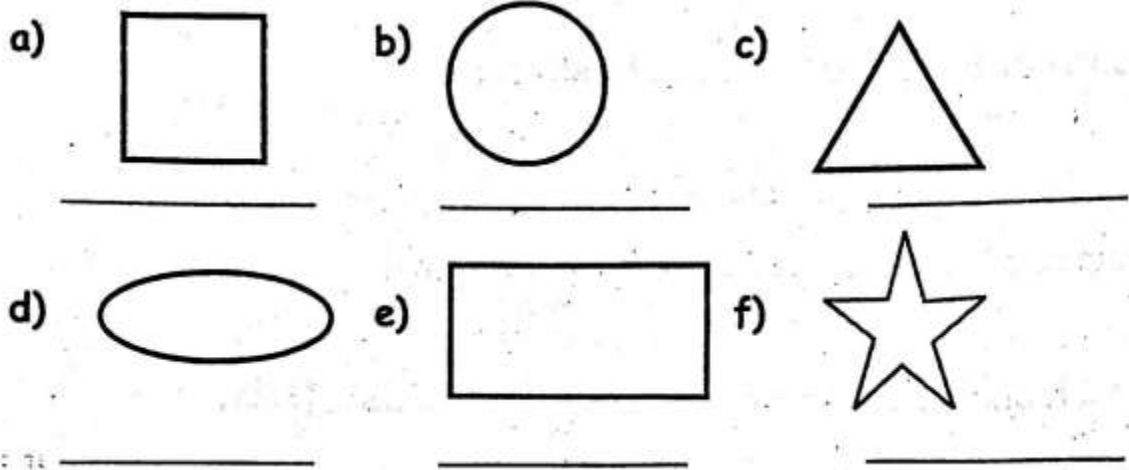
15. A week has _____ days. (1 mk)

16. Which one is heavier? (1mk)

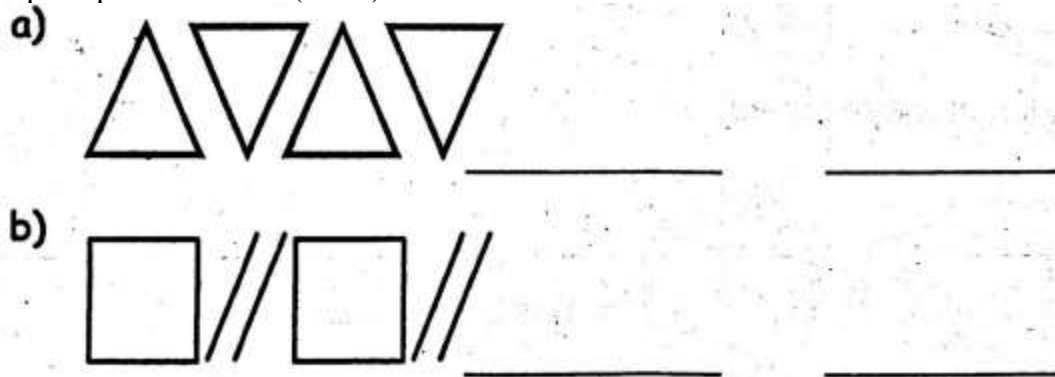


= _____

17. Name the shapes below (6mks)



18. Complete patterns below (4mks)



VOLUME 4
{ALL SUBJECTS}
QUESTIONS

Contact Kenya Educators Consultancy

0724333200/ 0795491185

**For Marking Schemes and More
Revision Materials During the Long
Holidays**

Happy Holidays!!!

#KENYA EDUCATORS CONSULTANNCY

NAME.....

GRADE 1 END OF YEAR
HOLIDAY HOMEWORK BOOKLET
VOLUME 4
ENGLISH
GRADE 1
TERM 3

Listening and speaking

1. Good morning?
2. What is your name?
3. Name the members of family at your home?
4. Who is your friend?
5. Why do you love that friend?

Dictation

6.
7.
8.
9.
- 10.....

Make words with double "ee"

- 11.....
- 12.....
- 13.....

	One	Many
14	cow
15	desks
16	table
17	dress
18	cups

Fill in the missing letters

- 19.t__able
20.__indow
21.c__air
22.dr__ss
23.t_p

Use "is" or "am" to complete sentences

- 24.She..... a small girl.
25.I.....a girl
26.Jane.....a beautiful girl.

Write the opposite

- 27.sister
- 28.boy

Make words

- 29.b.....
30.k.....
31.ch.....

NAME.....

GRADE 1 END OF YEAR
HOLIDAY HOMEWORK BOOKLET
VOLUME 4
INTEGRATED LEARNING AREAS
(Environmental Activities & Creative arts and
Religious Activities)
GRADE 1
TERM 3

1. I clean my nose using a.....
(towel, handkerchief)

Name the items you can use to clean your body.

2.
3.
4.
5.

Animals can give us food such as

6.
7.




8.
9. We should wash our hands.....visiting toilet.
(before, after)

Write "bad habit" or "good habit"

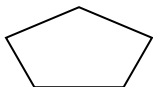
- 10.Picking nose
11.Washing hands.....
12.Brushing teeth.....
13.Biting nails.....
14.I use a.....and.....to
brush my teeth
15.The main source of water is.....
(rain, tap)
16.After bathing we dry our body using a
(handkerchief, towel)
17.Dirty hair keep.....
(lice, fly)
18.Bee give us.....
(honey, water)
19.We should.....fruits before eating. (cook, wash)
20.When we are sick we go to.....
(hospital, house)

CREATIVE ACTIVITIES

Name the lines below

1. 
2. 
3. 

4. This is.....shape



(regular, irregular)

5. What is
OΔOΔOΔ.....
6. Colour the flower

1. I canmy hands as I sing.
(clap, bite)
2. Draw a shaker
3. The songs sung by children as they play is called?.....
(patriotic song, singing game)
4. Draw a drum

NAME.....

**GRADE 1 END OF YEAR
HOLIDAY HOMEWORK BOOKLET**

VOLUME 4

KISWAHILI

**GRADE 1
TERM 3**

Kuzikiliza na kuongea

1. Hujambo?
2. Jina lako ni nani?
3. Shule yako ni gani?
4. Nieleze mambo kadhaa kuhusu shule yako?
5. Mwalimu wako wa darasa ni nani?

Imla

6.
7.
8.
9.
10.

Chagua jibu mwafaka

11. Mti huu ni
(refu/mrefu)

12. Macho yangu ni.....
(mawili, mbili)

Unda maneno kulingana na silabi zifuatazo.

13. ba.....
14. sha.....

Andika kwa wingi

15. mtoto.....
16. kitabu.....
17. kalamu.....
18. darasa.....
19. dirisha.....

Andika kwa herufi kubwa

20. nyanya.....
21. chungwa.....
22. Majani.....

Chora picha hizi

23. kitabu
24. kalamu
25. Damu ni ya rangi gani?

26. Mtu akijikwaa utamwambia.....
(asante, pole)
27. Maziwa ni ya rangi gani?.....
28. Damu ni ya rangi gani?.....
29. Mnyama anayetupa mayai ni.....
30. Nguo ninazovaa shuleni huitwa?.....

NAME.....

GRADE 1 END OF YEAR
HOLIDAY HOMEWORK BOOKLET
VOLUME 4
MATHEMATICS
GRADE 1
TERM 3


Match the numbers


- | | |
|------|---|
| 1. 3 | 5 |
| 2. 5 | 3 |
| 3. 7 | 4 |
| 4. 9 | 7 |
| 5. 4 | 9 |

Fill in the blank with the next number

6. 5, 4, 3, 2,.....
7. 10, 11, 12, 13,.....
8. 17, 18, 19, 20,.....

Count the balls and write the number value

9.  =

10.  =

Draw the balls

11. $6 =$

12. $8 =$


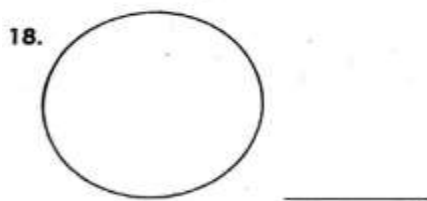
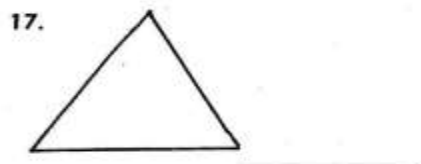
13. $5 =$

14. $10 =$

Add

$15.3 + 3 + 2 =$

$16.5 + 13 =$

Name the shapes

(triangle, oval, circle)

Write in numbers

20. twenty two

21. thirty

22. seventeen

23. twelve

24. I have 3 eggs. One is broken

How many remains.

25. Which number is small 12 and 14.

26. $8 - 5 =$

27. $9 - 4 =$

28. $6 - 2 =$

Write in words

29. Two cows has.....legs

30. One week has days

These lines are

31.  _____

32.  _____

33. I have.....fingers on my hands.

VOLUME 5
{ALL SUBJECTS}
QUESTIONS

Contact Kenya Educators Consultancy

0724333200/ 0795491185

**For Marking Schemes and More
Revision Materials During the Long
Holidays**

Happy Holidays!!!

#KENYA EDUCATORS CONSULTANNCY

NAME.....

**GRADE 1 END OF YEAR HOLIDAY
HOMEWORK BOOKLET****VOLUME 5****ENGLISH****GRADE 1****TERM 3****TASK 1: COMPREHENSION (10mks)****Read the following story and answer the questions that follow**

My name is John. I am a boy, I am six years old. Am in grade one. My parents are Mr. and Mrs. Kamau. I have one brother and one sister. They are so loving. My brother is Peter. My sister is Mary.

1. My name is _____
2. I am a _____
3. I am _____ years old.
4. John is in grade _____
(one, two)
5. Mr. Kamau is John's _____
(father, mother)
6. Mary is a _____
(girl, boy)
7. My father and mother are my _____
(sister, parents)

Draw the following pictures

Father	mother

--	--

10. Write correctly: ybo_____

TASK 2: GRAMMER (20mks)

Add 's' to make many

- 8. book_____
- 9. car_____
- 10. girl_____
- 11. spoon_____

Add-ing to form the verb

- 12. play_____
- 13. sleep_____
- 14. eat_____

Make words using the following letters

- 15. a_____
- 16. b_____
- 17. pe_____
- 18. c_____

Complete

- 19. My name is_____
- 20. I am a_____

TASK 3: WRITING DICTATION

Listen to the teacher and write the words

1. _____
2. _____
3. _____
4. _____
5. _____
6. _____
7. _____
8. _____
9. _____
10. _____

NAME.....

GRADE 1 END OF YEAR
HOLIDAY HOMEWORK BOOKLET
VOLUME 5
INTEGRATED LEARNING AREAS
(Environmental Activities & Creative arts and
Religious Activities)
GRADE 1
TERM 3

ENVIRONMENTAL


1. Name the domestic animals







2. We go to school to (learn, pray) _____
3. Name the objects seen in the sky (rainy, cloudy, moon, stars, sun)












4. The flowers are watered(morning and evening, night and noon)_____
5. Circle things found in the table room (3mks)

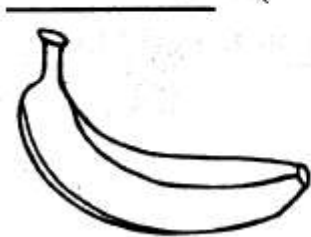


6. We cook food in the (kitchen, tableroom,classroom)_____
7. Name the items found in classroom



HYGIENE AND NUTRITION

1. Name the foods we eat




2. We should take (tea, medicine) using clean water. _____
3. We should wash our hands (everyday, once a day). _____
4. A is used to clean our nose. (towel, handkerchief). _____
5. Name the parts of a plant



C.R.E

1. The bible has (2,3,1) divisions
2. ____killed Goliath (Moses, David)
3. Name God's creation (meat,fish,sun,moon)



4. Jesus was born in (Nazareth,Bethlehem)._____
5. God knows me by my (size, name)._____
6. Father and mother are my(brothers,parents)._____
7. _____created me(satan,God)

NAME.....

GRADE 1 END OF YEAR
HOLIDAY HOMEWORK BOOKLET
VOLUME 5
KISWAHILI
GRADE 1
TERM 3

1. **Soma kwa sauti (Alama 10)**

Mimi ni kijana mdogo. Niko gredi ya kwanza. Mwalimu wangu ni-Bi Pendo. Baba na mama wanapenda mwalimu wangu. Kila siku mimi hucheza mpira.

2. **KUONGEA NA KUSIKILIZA**

Tazama picha kisha mwalimu atauliza maswali

a. Kuku anafanya nini?



b. Mtoto anafanya nini?



c. Mti umefanya nini? _____



d. Uji umefanyaje? _____



e. Baba anafanya nini? _____



3. **Soma hadithi kisha jibu maswali**

Hapo zamani za kale, paliishi paka na panya. Wanyama hawa waliishi pamoja. Walikuwa na ashamba kubwa karibu na msitu. Wanyama hawa walikuwa na watoto. Siku moja paka aliona njaa akala watoto wa panya. Panya alikasirika na kupotelea msituni na paka akaachwa nyumbani.

a. Taja wanyama katika hadithi

b. Wanyama hawa walikuwa na _____ kubwa.

c. Shamba la wanyama lilikuwa karibu na _____

d. Nani alikula watoto?

e. Nani alikasirika?

f. Panya alikasirika akapotelea wapi?

-
- g. Nani aliachwa nyumbani
-
- h. Paka hula nini?
-
- i. Chora Paka
-
4. Andika wingi wa majina haya
- a. Kikombe-----
 - b. Mti-----
 - c. Kiti-----
 - d. Mtoto-----
 - e. Mguu-----
5. Andika kinyume cha maneno
- a. Ketii
 - b. Lala
 - c. Lia
 - d. Panda
 - e. Anika
6. Andika maneno vizuri
- a. tiki
 - b. pachu
 - c. choma
7. Andika maneno haya kwa herufi kubwa
- a. Kitabu
 - b. Kalamu
 - c. Mwavuli
8. Andika maneno utakayosomewa na mwalimu

NAME.....

GRADE 1 END OF YEAR HOLIDAY HOMEWORK BOOKLET

VOLUME 5

MATHEMATICS

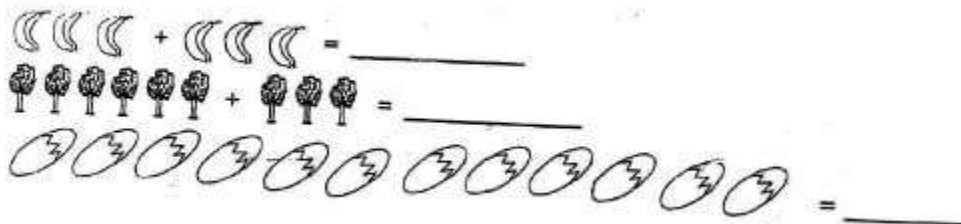
GRADE 1

TERM 3

1. How many balls are there?



2. Count and write how many



3. Draw objects

- a. 15 =
- b. 9 =
- c. 4 =
- d. 3 =

4. Put together

- a. $1 + 3 + 4 =$
- b. $5 + 5 + 0 =$
- c. $2 + 2 + 3 =$
- d. $7 + 3 + 1 =$

5. Take away

- a. $9 - 3 =$
b. $11 - 3 =$
c. $10 - 1 =$
d. $8 - 4 =$
6. Match the shapes



triangle



star

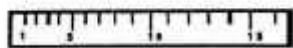


rectangle

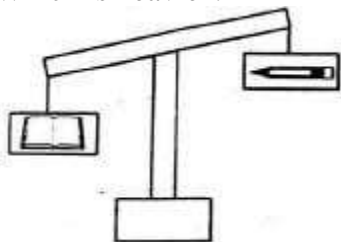


oval

7. Measuremnts:
Which one is shorter =



8. Which is heavier?



9. Which one holds more water?



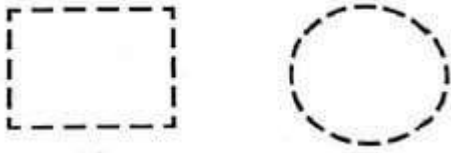
10. The leaf is _____ than the table.



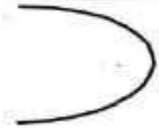
(lighter, heavier)

Geometry

11. Join the dots and form shapes

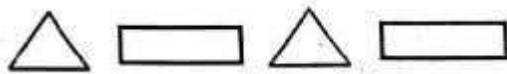


12. This is a _____ line.



(curved, straight)

13. Draw the next shape in the pattern below.



14. Complete.

