

**KENYA PRIMARY SCHOOL EDUCATION ASSESSMENT (KPSEA)**

**MONITORING LEARNERS PROGRESS**

**GRADE SIX - TERM 1 YEAR 2025**

**MATHEMATICS**

**READ THESE INSTRUCTIONS CAREFULLY**

1. Use an ordinary pencil only.
2. Make sure that you have written on the answer sheet
  - (i) YOUR NUMBER
  - (ii) YOUR NAME
  - (iii) NAME OF YOUR SCHOOL
3. When you have chosen your answer, mark it on the ANSWER SHEET, not in this question booklet.

*Time: 1HR 20 minutes*

- |  |   |
|--|---|
| <p>1. The number of learners who joined Secondary School in the year 2024 was 496,271. What is the place value of digit 4 in the number?</p> <p>A. Thousands<br/>B. Tens of thousands<br/>C. Hundreds of thousands<br/>D. Hundreds</p> <p>2. What is the next number in the sequence below?<br/>1700, 3400, 5100 _____</p> <p>A. 6400<br/>B. 6800<br/>C. 5800<br/>D. 8500</p> <p>3. Use digits 5, 7, 3, 9 and 0 to form the smallest number possible</p> <p>A. 30579<br/>B. 03579<br/>C. 35790<br/>D. 35079</p> <p>4. Three bells ring at intervals of 12 seconds, 18 seconds and 24 seconds. If they rang together, how long will they take to ring again together?</p> <p>A. 72 seconds<br/>B. 54 seconds<br/>C. 36 seconds<br/>D. 108 seconds</p> | <p>5. During a tree planting day, Grade 6 learners planted 96369 trees in a school farm. Write the number of trees planted in words.</p> <p>A. Nine million, six hundred thousand three hundred and sixty nine.<br/>B. Nine hundred and sixty three thousand and sixty nine<br/>C. Ninety six thousand three hundred and ninety six<br/>D. Ninety six thousand, three hundred and sixty nine</p> <p>6. During the Deputy Presidents inaugurations, there were 625 men and 486 women. What was the total number of people who attended the inauguration rounded off to the nearest thousands?</p> <p>A. 1111<br/>B. 1,100<br/>C. 1,000<br/>D. 1,110</p> <p>7. In a forest there are 86486 trees. Out of these 24631 were natural while the others had been planted. How many trees had been planted?</p> <p>A. 111117<br/>B. 60117<br/>C. 61855<br/>D. 61805</p> |
|--|---|



8. Multiply  $761 \times 13$   
A. 9893  
B. 21183  
C. 774  
D. 9891
9. Work out:  $168 \div 12 =$   
A. 13  
B. 182  
C. 154  
D. 14
10. A shoemaker bought 18.4kg of rice on Monday. He bought 9.8kg of rice on Tuesday and then sold 22.84kg on Wednesday. How many kilograms of rice remained?  
A. 5.44kg  
B. 51.04kg  
C. 4.2kg  
D. 5.36kg
11. What is the greatest number that can divide 27 and 36?  
A. 3  
B. 9  
C. 32  
D. 20
12. Which one the following numbers is divisible by 2, 5 and 10?  
A. 250  
B. 235  
C. 222  
D. 525
13. Which is the next number in the pattern 16, 20, 24, \_\_\_\_\_?  
A. 26  
B. 30  
C. 28  
D. 32
14. Which of the following is not a source of County government money?  
A. Business permit  
B. Packing  
C. Land rate  
D. Corruption
15. Simplify the fraction to its simplest form  $\frac{36}{48}$   
A.  $\frac{3}{8}$   
B.  $\frac{5}{24}$   
C.  $\frac{4}{6}$   
D.  $\frac{3}{4}$
16. Convert 75kg 250g into grams  
A. 75250g  
B. 7525g  
C. 7250g  
D. 725g



17. Convert 8 minutes 15 seconds into seconds .

- A. 850 seconds
- B. 490 seconds
- C. 480 seconds
- D. 495 seconds

18. Multiply:

24 litres 250ml by 3.

- A. 73 litres 750ml
- B. 71 litres 650ml
- C. 72 litres 750ml
- D. 72 litres 75ml

19. Order the following fractions in descending order

$\frac{5}{9}, \frac{2}{9}, \frac{7}{9}, \frac{4}{9}$


A.  $\frac{2}{9}, \frac{7}{9}, \frac{4}{9}, \frac{5}{9}$

B.  $\frac{2}{9}, \frac{4}{9}, \frac{5}{9}, \frac{7}{9}$

C.  $\frac{7}{9}, \frac{5}{9}, \frac{4}{9}, \frac{2}{9}$

D.  $\frac{4}{2}, \frac{2}{9}, \frac{5}{9}, \frac{7}{9}$

20. Find the area of the rectangle below.



- A.  $150\text{cm}^2$
- B.  $25\text{cm}$
- B.  $50\text{cm}$
- D.  $1500\text{cm}^2$

21. Work out:

Min	Sec
5	42
+ 4	20

- A. 10 minutes 2 seconds
- B. 9 minutes 62 seconds
- C. 9 minutes 2 seconds
- D. 10 minutes 62 seconds

22. Work out:

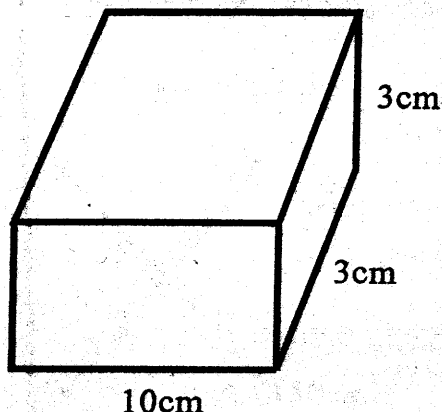
Km	M
8	560
+13	700

- A. 22km 60m
- B. 21km 1100m
- C. 21km 260m
- D. 22km 260m

23. Find the value of y in  $15 \times y = 75$

- A. 5
- B. 3
- C. 15
- D. 2

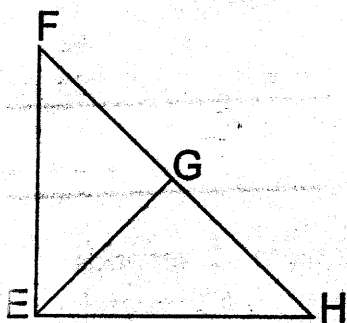
24. Work out the volume of the figure below



- A.  $900\text{cm}^3$
- B.  $90\text{cm}^3$
- C.  $9\text{cm}^3$
- D.  $30\text{cm}^3$



25. Identify the vertical line in the diagram

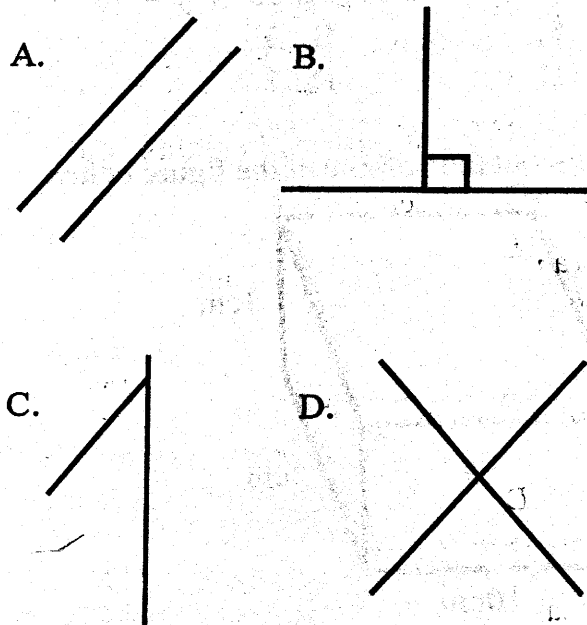


- A. Line FG
- B. Line EF
- C. Line EH
- D. Line HG

26. A square garden has a length of 40m. Find its area.

- A.  $400\text{m}^2$
- B.  $1600\text{m}^2$
- C.  $160\text{m}^2$
- D.  $4000\text{cm}^2$

27. Which of the following diagrams shows perpendicular lines?



28. Write down the first four multiples of six

- A. 1, 2, 3, 6
- B. 6, 12, 18, 24
- C. 12, 18, 24, 36
- D. 6, 15, 18, 21

29. What is the place value of digit 5 in 9.532?

- A. Hundreds
- B. Tenths
- C. Hundredths
- D. Thousandths

30. Use the table to answer the questions.

Shoe Size	Tally Mark	No. of People
2		10
3		16
4		7
5		9
6		_____

How many people wear Shoe No. 6?

- A. 9
- B. 13
- C. 10
- D. 12



# KENYA PRIMARY SCHOOL EDUCATION ASSESSMENT (KPSEA)

## MONITORING LEARNERS PROGRESS

### GRADE SIX - TERM 1 YEAR 2025

#### ENGLISH

##### READ THESE INSTRUCTIONS CAREFULLY

1. Use an ordinary pencil only.
2. Make sure that you have written on the answer sheet  
(i) YOUR NUMBER      (ii) YOUR NAME      (iii) NAME OF YOUR SCHOOL
3. When you have chosen your answer, mark it on the ANSWER SHEET, not in this question booklet.

**Time: 2 Hours**

##### Read the dialogue below and answer questions 1 - 5:

- Jayden** : Excuse me Mrs. Nzuki. How can I improve my performance?
- Mrs. Nzuki** : You need to study hard and reduce time spent on television and internet?
- Jayden** : Does that mean I stop playing games on my table completely?
- Mrs. Nzuki** : Oh no! I mean, all you need is to plan your time well. That means more time on your studies and hardwork.
- Jayden** : I have always wanted to be a doctor when I grow up.
- Mrs. Nzuki** : You can be anything you want to be in life if you believe and work hard.
- Jayden** : Then, I promise to work hard.

- |   |  |
|---|--|
| 1. From the dialogue which modern device does Jayden own?<br>A. Television      B. Smartphone<br>C. A laptop      D. A tablet   | B. improving performance is impossible<br>C. Planning time and working is always good<br>D. Watching television is wrong.  |
| 2. What shows that Jayden is thinking about his future?<br>A. He made use of internet<br>B. He wanted to become a doctor<br>C. He used to play many games<br>D. He spent time watching television | 4. To improve his performance, Jayden<br>A. promised to work hard<br>B. Believed he could do anything<br>C. Stopped playing games completely<br>D. Stopped planning his time well. |
| 3. According to Mrs. Nzuki<br>A. too much time on TV is wrong   | 5. Which polite words did Jayden use?<br>A. Playing      B. I promise<br>C. Excuse me      D. I improve  |



**Read the passage below and then answer questions 6 - 10:**

One day as the sun was going down, some very big birds were coming out of the bushes. They were swans. The little duck was thinking that they were the most beautiful birds on earth. They were the whitest birds and had long beautiful necks. Their talk was very different to that of the ducks.

They opened their wings and their big bodies lifted from the water into the air. Before long, they were up in the sky. On their way to warm lands and open waters. The little duck did not understand his feelings as he turned to watch them fly away. A sadness filled him as they were leaving. He cried out to them and the sound he made surprised him, because it was the first time he had made it.

He was not able to stop thinking about those beautiful birds, but in a short time he had other problems to think about.

- |  |   |
|--|---|
| 6. The birds mentioned in the story were<br>A. white birds      B. big birds<br>C. swans              D. ducks and swans                       | 9. The duck ran away through the<br>A. door<br>B. roof<br>C. window<br>D. crack                 |
| 7. Which birds were able to fly?<br>A. Ugly birds      B. Duck birds<br>C. None              D. White birds                                    | 10. The plural of the word <b>duck</b> is<br>A. duckies<br>B. ducks<br>C. ducksis<br>D. duckest |
| 8. Why did the man kick the ice?<br>A. To play with it<br>B. To take to the house<br>C. He wanted to turn it to water<br>D. He had seen a duck |   |

**Read the passage below and answer questions 11-15:**

Long ago, in India, a pair of crows nested in a hollow tree at the bottom of which lived a fierce snake. The snake used to eat the young birds as soon as they were hatched.

"Oh, dear how can we stop this horrid snake from eating our children?" Said mother crow one day.

"We must get rid of him, my dear," replied Father crow. "But that is impossible," said Mrs. Crow.

"You know very well that he is much stronger than we are."

"Don't worry my dear, answered her husband. "Just leave everything to me."

The following day, The King's son came down to a nearby river to swim. No sooner had he entered than the father crow seized the lovely golden anklet which the prince had taken off. He dropped it inside the hollow tree where they had their nest.

While dressing, the prince noticed his precious anklet was missing and ordered his servants to search everywhere for it. After sometime, the missing anklet was found in the hollow tree.

The servants also found the cruel snake and killed it, and so the crows were able to bring up their next family in peace. This story teaches us that skill will often make up for lack of strength.



11. According to the passage who came down the river the next day?  
 A. Father crow  
 B. Mother crow  
 C. The king and his son  
 D. The prince
12. Why did the prince go to the river?  
 A. He wanted to swim  
 B. He wanted to kill the cruel snake  
 C. He wanted to drink water  
 D. He was looking for his anklet
13. When the King's son realised that his anklet was missing, he  
 A. Started looking for it everywhere  
 B. Asked the crow to bring it to him

- C. Ordered his servants to search for it.  
 D. He found it immediately
14. Who found the missing piece of jewellery?  
 A. The prince B. The crow  
 C. The snake D. The servant
15. What did the crow do while the King's son was swimming?  
 A. He found the carmel snake and killed it.  
 B. He informed the servants where the anklet was.  
 C. He hid the anklet  
 D. He returned gold anklet to its owner

Read the passage below. It contains blank spaces numbered 16 - 20. For each blank space select the best alternative from the choices given to fill the blank spaces;

There 16 many different 17 of biocides and they can 18 used for many different 19. Insects are killed 20 insecticides.

- |               |             |            |           |
|---------------|-------------|------------|-----------|
| 16. A. is     | B. was      | C. were    | D. are    |
| 17. A. kind   | B. makes    | C. kinds   | D. types  |
| 18. A. be     | B. bee      | C. being   | D. always |
| 19. A. things | B. purposes | C. purpose | D. reason |
| 20. A. and    | B. in       | C. with    | D. by     |

For questions 21 - 25, fill in the blank spaces with the correct choice;

21. Food is to hunger, as water is to \_\_\_\_\_  
 A. thirsty B. drink  
 C. thirst D. swallow
22. None of the boys \_\_\_\_\_ finished the work  
 A. have B. have been  
 C. has D. had
23. \_\_\_\_\_ of the two balls is better?  
 A. Which B. When  
 C. What D. Where
24. \_\_\_\_\_ did the mother go after the \_\_\_\_\_ meeting?  
 A. What B. Where  
 C. Which D. When
25. Jeniffer is the \_\_\_\_\_ of all the girls in our class.  
 A. taller B. tallest  
 C. tall D. most tallest

For question 26 - 27; write the opposite of the underlined words;

26. Njeri is a beautiful girl.  
 A. ugly B. poor  
 C. hungry D. handsome
27. I am annoyed by his behaviour.  
 A. amazed B. worried  
 C. happy D. surprised
28. I have been waiting for you \_\_\_\_\_ morning.  
 A. since B. until  
 C. For D. till

For questions 29-30, choose the correct word which mean the SAME as the underlined ones.

29. John Mambo is a very upright man in our village.  
 A. poor B. dishonest  
 C. ordinary D. honest
30. The inhabitants of Mombasa are very friendly.  
 A. tourists B. visitors  
 C. residents D. workers



**Write an interesting composition on;**

## "HOLIDAY CELEBRATIONS"

This image shows a single sheet of white paper with horizontal black ruling lines. The lines are evenly spaced and run across the width of the page. There are approximately 20 lines visible. The paper has a slightly textured appearance and some minor blemishes or dust specks. The edges of the paper are slightly irregular.



# GREDI YA SITA

## JARIBIO LA MTHANI

### MWAKA - 2025

### KISWAHILI : LUGHA

{CBC}



MUDA: Saa 1 Dakika 40

Jina .....

Jina la shule .....

#### VIWANGO VYA KUZINGATIA KATIKA KUTATHMINI

KUZIDI MATARAJIO	KUFIKIA MATARAJIO	KUKARIBIA MATARAJIO	MBALI NA MATARAJIO
41 - 50	25 - 40	13 - 24	0 - 12

#### Soma mazungumzo yafuatayo kisha ujibu maswali 1- 5.

- Amina : Sabalkheri Juma  
 Juma : Sabalkheri Amina. Sikujua kuwa nitakupata huku  
 Amina : (Huku akitabasamu) Nimefurahi kukuona pia! Nilikuja na familia yangu katika hafla hii ya shule. Na wewe je?  
 Juma : Pia mimi nimekuja na wazazi wangu. Wamefurahia sana kwa vile ni mara yao ya kwanza kuhudhuria hafla kama hii.  
 Amina : Hata mimi! Unafurahia shughuli gani zaidi hapa?  
 Juma : Michezo ya nje. Nimecheza kadanda na kuruka kwenye mzunguko ule. Na wewe?  
 Amina : Mimi hupenda sana kuchora na kusoma vitabu vya hadithi. Nimefurahia kupata nafasi ndani ya chumba kile.  
 Juma : Aha! Yaonekana umefurahia sana.  
 Amina : Utafanya nini baada ya hafla hii kumalizika?  
 Juma : Nitapumzika nyumbani. Na wewe?  
 Amina : Nitacheza kidogo na ndugu zangu  
 Juma : Haya basi. Furahia siku yako na uwasalimu wazazi  
 Amina : Asante .Kwaheri

- Unafikiri mazungumzo haya yalitokea katika majira ya :-  
 A. jioni                      B. alasiri                      C. asubuhi                      D. usiku
- Si ukweli kusema kuwa:-  
 A. Juma hupenda kuchora  
 B. Amina na Juma wamefurahia  
 C. Juma na Amina wameletwa na wazazi wao  
 D. Amina na Juma wana nidhamu katika kuwasiliana
- Kulingana na mazungumzo ,Amina atafanya nini baada ya hafla?  
 A. Atapumzika                      B. Atachora na kusoma vitabu  
 C. Atacheza na ndugu zake                      D. Atasaidia katika kufanya kazi za nyumbani
- Mazungumzo haya yanatokea wapi?  
 A. Nyumbani                      B. Barabarani                      C. Uwanjani                      D. Shuleni
- Neno tabasamu limetumika katika kifungu . Kinyume chake ni :-  
 A. furahia                      B. kasirika                      C. nuna                      D. lia



**Soma kifungu kifuatacho kisha ujibu maswali 6 - 15.**

Hapo zamani za kale katika msitu wa Kijani, kulikuwa na mbweha aliyekuwa akijigamba kila mara juu ya kasi yake hasa akikimbia. Aliwadhihaki wanyama waliotembea taratibu. Kila alipowaona, alicheka akisema, "Kwa kasi yangu kama mshale, hakuna anayeniweza hapa msituni!"

Kinyonga aliwaza na kuapa kumfundisha mbweha funzo. Siku moja alimwambia, "Mbweha, si kila chenye mbio kina nguvu ya ushindi. Ngoja tuone ni nani atakayefika mtoni kwanza tukishindana leo mchana."

Mbweha alicheka kwa dharau akijiona bora, akisema, "Wewe? Kinyonga mdogo kama unyoya! Usiote ndoto za mchana." Wanyama wote walikusanyika kuona mbio hizo wakionekana kuwa na kiu cha kumshangilia mshindi. Mbio zilipoanza, mbweha aliruka kwa kasi na kumuacha kinyonga mbali. Mbweha alichoka mapema na kuamua kupumzika kidogo akiamini kuwa kinyonga alikuwa mbali sana. Kinyonga naye alijikaza bila kukata tamaa. Mbweha alipokuwa amelala, kinyonga alimpita kwa utulivu. Hatimaye kinyonga alifika mtoni. Mbweha alipofika na kumkuta kinyonga tayari amefika, alishangaa na kujutia kujisifu kwake.

6. Mbweha alifananisha kasi yake na :-  
A. mshale                      B. upepo                      C. farasi                      D. kinyonga
7. Neno 'aliwadhihaki' limetumika katika kifungu. Neno 'dhihaki' lina maana gani?  
A. Sifu                      B. Dharau                      C. Amini                      D. Ringa
8. Maneno 'Mdogo kama unyoya' ni ya aina gani?  
A. Msemo                      B. Methali                      C. Istiari                      D. Tashbihi
9. Baadhi ni sifa za kinyonga, isipokuwa:-  
A. mwenye bidii                      B. mwenye kiburi                      C. ana busara                      D. ni mvumilivu
10. Kwa nini mbweha aliamua kupumzika katikati ya mbio?  
A. Alikuwa amechoka                      B. Alimtaka kinyonga ashinde  
C. Alidhani kinyonga alikuwa mbali sana                      D. Alikuwa amekata tamaa
11. Ni methali gani kati ya hizi ambayo inaeleza hali ya mbweha?  
A. Aliye juu mngoje chini                      B. Mchumia juani hulia kivulini  
C. Polepole ndio mwendo                      D. Mwenda pole hajikwai
12. Ni kweli kusema kuwa:-  
A. Mbweha na kinyonga waliishi peke yao msituni  
B. Mbweha aliibuka mshindi  
C. Mbweha ni mnyama mwenye majivuno  
D. Mashindano ya kukimbia yalifanyika usiku
13. Mbweha alikuwa na mtazamo upi kuhusu wanyama waliotembea taratibu?  
A. Aliwachukia                      B. Aliwaona wadogo  
C. Alisema wana uzembe                      D. Aliwadharau na kujiona bora zaidi
14. Wanyama waliishi wapi?  
A. Shambani                      B. Mtoni                      C. Msituni                      D. Mlimani
15. Je, funzo kuu la hadithi hii ni?  
A. Tusiwe wazembe                      B. Kiburi kina manufaa  
C. Bidii ni muhimu katika kufanikiwa ila si kiburi                      D. Kutembea polepole hupelekea kushida



**Soma kifungu kifuatacho kisha ujibu maswali 16 - 24.**

Mlima Kilimanjaro ni mlima mrefu zaidi barani Afrika. Una urefu wa mita 5,895. Mlima huu uko kaskazini mwa Tanzania, karibu na mpaka wa Kenya. Mlima Kilimanjaro unajulikana kwa kilele chake cha theluji hata ingawa unapatikana katika eneo la Kitropiki. Mlima huu pia una majina maarufu ya vilele vyake. Kibo ndicho kilele kirefu zaidi na ni maarufu kwa watalii wanaopenda kupanda milima. Safari ya kupanda hadi kileleni inaweza kuchukua hadi siku saba kulingana na kasi ya mpandaji na hali ya hewa.

Kilimo pia hufanyika kwenye maeneo ya chini ya Mlima Kilimanjaro kwa vile ardhi na mchanga una rutuba. Mimea kama vile ndizi, kahawa na mahindi hustawi vizuri karibu na mlima huu. Mlima huu pia huwa chanzo muhimu cha maji safi kwa wakazi wa maeneo ya karibu ambao wanategemea mito inayotiririka kutoka mlima huo.

16. Mlima Kilimanjaro uko \_\_\_\_\_ wa Kenya  
A. kaskazini      B. kusini      C. magharibi      D. mashariki
17. Mlima Kilimanjaro ni maarufu kwa sababu gani kulingana na kifungu?  
A. Uawavutia watalii  
B. Una theluji  
C. Kilele chake cha theluji na uko katika eneo la kitropiki  
D. Uko kaskazini mwa Tanzania
18. Ni kwa nini wakazi wa karibu wanategemea Mlima Kilimanjaro kwa maji?  
A. Mlima huu hutoa mvua nyingi      B. Kuna mito inayotiririka kutoka mlima huo  
C. Hakuna maji kwingine      D. Mlima huwa na maji kwenye kilele
19. Safari ya kupanda "Mlima Kilimanjaro" huweza kuwachukua watalii muda gani?  
A. Wiki mbili      B. Siku saba  
C. Siku tano      D. Siku hutegemea mpandaji
20. Katika neno Mlima Kilimanjaro herufi za kwanza zinaandikwa kwa herufi kubwa kwa nini?  
A. Ni mlima mrefu      B. Ni nomino dhahania  
C. Ni nomino ya pekee      D. Ni nomino ya kawaida
21. Mimea kama ndizi hukuzwa katika maeneo ya chini ya Mlima Kilimanjaro. Wakulima wakivuna ndizi nyingi watauza:-  
A. tita la ndizi      B. chane ya ndizi      C. kicha cha ndizi      D. furushi landizi
22. Kwa nini Mlima Kilimanjaro ni kivutio kikuu cha watalii kulingana na kifungu?  
A. Kwa sababu kuna wanyama wengi      B. Una mito mingi  
C. Ni mlima mrefu zaidi Afrika na una theluji      D. Kwa sababu uko karibu na bahari
23. Ni kweli kusema  
A. Hali ya hewa huathiri kasi ya kupanda mlima  
B. Maji kutoka Mlima Kilimanjaro ni machafu  
C. Mlima Kilimanjaro huwa na manufaa ya kuwavutia watalii pekee  
D. Mlima Kilimanjaro ni mrefu zaidi duniani nzima
24. Kilele kirefu zaidi cha Mlima Kilimanjaro huitwa  
A. Kibo      B. Shira      C. Meru      D. Mawenzi

**Jaza pengo ukitumia majibu sahihi**

Katika dunia ya sasa 25 \_\_\_\_\_ imekuwa muhimu katika maisha ya kila siku ya binadamu. Vifaa kama rununu na 26 \_\_\_\_\_ vimebadilisha jinsi tunavyowasiliana 27 \_\_\_\_\_ tunavyofanya kazi na kupata habari. Wanafunzi wanaweza kutumia kompyuta kuandika ripoti na hata kushiriki kwenye 28 \_\_\_\_\_ kwa njia ya mtandao. Simu 29 \_\_\_\_\_ mkononi zimewezesha mawasiliano ya 30 \_\_\_\_\_ . 31 \_\_\_\_\_ imeleta manufaa makubwa pia ina changamoto zake. Baadhi ya watu 32 \_\_\_\_\_ vijana, hutumia 33 \_\_\_\_\_ mwingi kwenye 34 \_\_\_\_\_ ya kijamii 35 \_\_\_\_\_ kujihusisha na masomo na shughuli za maendeleo.



- |     |               |               |               |               |
|-----|---------------|---------------|---------------|---------------|
| 25. | A. teknolojia | B. teknolojia | C. tecnolojia | D. kuzungumza |
| 26. | A. compyuta   | B. kalamu     | C. kompyuta   | D. komputa    |
| 27. | A. .          | B. ,          | C. :          | D. na         |
| 28. | A. masomo     | B. ukulima    | C. kazi       | D. habari     |
| 29. | A. la         | B. ya         | C. za         | D. cha        |
| 30. | A. haraka     | B. polepole   | C. taratibu   | D. pole       |
| 31. | A. Na         | B. Pia        | C. Mathalan   | D. Ingawa     |
| 32. | A. ilhali     | B. hususan    | C. na         | D. ila        |
| 33. | A. mda        | B. muda       | C. hali       | D. nyakati    |
| 34. | A. mtandao    | B. viwanda    | C. maarifa    | D. mitandao   |
| 35. | A. na         | B. baada ya   | C. badala ya  | D. zaidi ya   |

**Jibu maswali yafuatayo kwa kufuata maagizo 36 - 50.**

36. Ni neno lipi kati ya haya ambalo halijaandikwa visahihi?  
A. Chaja                      B. Juga                      C. Kadi                      D. Ganda
37. Nyumba safi ni hii. Ni neno lipi ambalo ni kivumishi cha sifa katika sentensi hiyo?  
A. Safi                      B. Nyumba                      C. Ni                      D. Hii
38. Tumia kirejeshi -amba- inavyofaa. Kuta \_\_\_\_\_ zimebomoka ni zao.  
A. ambalo                      B. ambao                      C. ambazo                      D. ambayo
39. Chagua neno ambalo liko katika ngeli ya KI - VI  
A. Kiwavi                      B. Kipepeo                      C. Nyumba                      D. Chandarua
40. Kisawe cha mama ni?  
A. Baba                      B. Nina                      C. Mtoto                      D. Mwana
41. Kamilisha maagano yafuatayo. Alamsiki \_\_\_\_\_  
A. Alamsiki                      B. Binuru                      C. Buriani                      D. Njema
42. Kamilisha sentensi ifuatayo kwa kutumia kiulizi mwafaka  
Wanafunzi \_\_\_\_\_ walipata chanjo ya korona?  
A. ipi                      B. yupi                      C. wapi                      D. yapi
43. Insha ya wasifu huwa na sehemu zifuatazo isipokuwa  
A. anwani                      B. utangulizi                      C. mwili                      D. hitimisho
44. Geuza kitenzi 'andika' katika kauli ya kutendea  
A. andikea                      B. andikiwa                      C. andikiana                      D. andikia
45. Kamilisha kwa kutumia nomino ya makundi  
Nilimsaidia mama kubeba \_\_\_\_\_ la kuni kutoka msituni  
A. mzigo                      B. furushi                      C. tita                      D. msitu
46. Mafuta , maziwa na maji ni mifano ya nomino za :-  
A. kawaida                      B. zisizohesabika                      C. dhahania                      D. wingi
47. Tegua kitendawili kifuatacho . Nyumba yangu haina mlango  
A. Yai                      B. Mlango                      C. Dirisha                      D. Gari
48. Andika kinyume cha kitenzi : Meza  
A. kiti                      B. dawati                      C. mezua                      D. tema
49. Andika wingi wa sentensi ifuatayo:- Ulezi wa mzazi huyu unafaa  
A. Malezi ya wazazi wale yanafaa                      B. Malezi ya wazazi hawa yanafaa  
C. Ulezi wa wazazi hawa yanafaa                      D. Ulezi wa mzazi huyu unafaa
50. Ukubwa wa nomino 'mlango' ni:  
A. kilango                      B. kimlango                      C. lango                      D. malango



# KENYA PRIMARY SCHOOL EDUCATION ASSESSMENT (KPSEA)

## MONITORING LEARNERS PROGRESS

### GRADE SIX - TERM 1 YEAR 2025

#### SCIENCE & TECHNOLOGY Time: 1HR 40 min

1. Grade 6 learners from Baraka Newlite Academy were asked by their Science and Technology teacher to list down different types of flowering plants. Who did not give the correct answer?

A. Wavire - Maize  
B. Chege - Algae  
C. Moly - Pawpaw  
D. Jayden - Beans

2. The diagram below shows a safety tool that was used by the Grade 6 learners during their Science and Technology nature walk while holding plants and animals.



The safety tools drawn above are used to protect the \_\_\_\_\_ of the body.

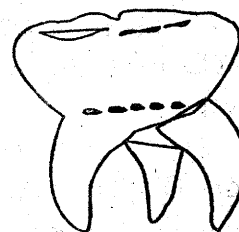
A. Head                      B. Hands  
C. Eyes                      D. Ears

3. Which one of the following is NOT an internal parasite?
- A. Roundworms      B. Hookworms  
C. Tapeworm          D. Jiggers
4. The following are parts of a seed. Which one is NOT?
- A. Testa                      B. Embryo  
C. Stem                      D. Radicle
5. Which one of the following is not an example of a word processor software?
- A. Desktop                  B. Open Office  
C. Writer                      D. Microsoft Word
6. \_\_\_\_\_ is the process by which solid changes directly into liquid.
- A. Sublimation          B. Melting  
C. Freezing                  D. Evaporation

7. The type of fungi that is used by human beings in the baking industry is known as

A. moulds                  B. mushroom  
C. yeast                      D. Puffballs

8. The type of tooth drawn below was modelled by Jeremy who is a Grade 6 learner at Wisdom of Tower School.



How many roots does the above tooth have?

A. One    B. Three    C. Two    D. Four

9. The following are all the waterborne diseases. Which one is NOT?
- A. Typhoid                  B. Polio  
C. Cholera                  D. Dysentery
10. Grade 6 learners were discussing about the parts of the digestive systems. During the discussion they stated the part of the digestive system \_\_\_\_\_ that produced gastric juice. Which part \_\_\_\_\_ did they state?
- A. In the mouth          B. In the ileum  
C. In the pancreas      D. In the stomach
11. The following are some of the common water pollutants in the environment. Which one is NOT?
- A. Slaughterhouse waste  
B. Burning charcoal  
C. Dead rotten plants  
D. Domestic sewage

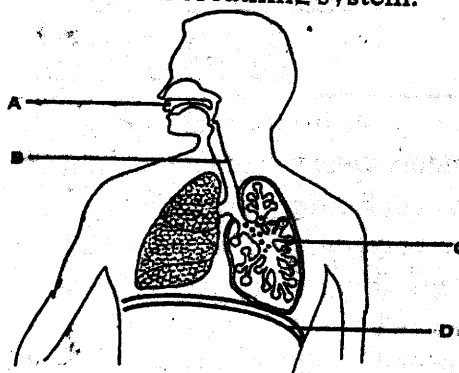


12. State the meaning of the following coding sign.



- A. Danger ahead    B. Zebra cross  
C. No entry    D. No smoking
13. Which one of the following part of the digital device is correctly matched with its function?  
A. Keyboard - Controls and process the programmes  
B. Cables - Connects the device to its hardware  
C. Mouse - Types into the computer  
D. Processor - Displays what is going on in the computer.
14. The part of the human skeleton that protects the brain is called  
A. rib cage    B. skull  
C. limbs    D backbone
15. The following are the functions of a diaphragm in a human breathing system. Which one is NOT?  
A. It controls the breathing  
B. It separates the chest from the abdomen.  
C. It receives the air from the nose  
D. It helps to fill the lungs with air when breathing in.
16. Grade 6 learners were asked to mention the diseases that affects the human breathing system. Which diseases did they not mention?  
A. Malaria    B. Tuberculosis  
C. Asthma    D. Pneumonia
17. \_\_\_\_\_ is the process in which the gas changes into a liquid.  
A. Condensation    B. Evaporation  
C. Sublimation    D. Pollution
18. \_\_\_\_\_ is used to find out whether a substance is an acid or base in nature  
A. Litmus paper    B. Tongue  
C. Microscope    D. Sugar paper

19. The diagram below shows some parts of the human breathing system.



Among the parts labelled A, B, C and D, which part represents trachea?

- A. D    B. C    C. B    D. A
20. \_\_\_\_\_ means coming up with ways to stop producing waste.  
A. Re-using    B. Recycling  
C. Reducing    D. Repairing
21. The following are the different types of plants which one is NOT?  
A. Tree    B. Flower  
C. Herb    D. Grass
22. Which part of a plant is responsible for making food for the plants?  
A. leaves    B. Stem    C. Fruits    D. Seeds
23. The following plants have got the fibrous roots EXCEPT one. Which one is it?  
A. Beans    B. Maize    C. Millet    D. Wheat
24. The best weather for Grade 6 learner to fly the kite below is \_\_\_\_\_



- A. calm weather    B. sunny weather  
C. rainy weather    D. windy weather
25. Grade 6 learners were asked by their Science and Technology teacher to come to school with digital devices for learning. Among the following learners, who did not bring a digital device for learning?  
A. Melody - Brought a laptop  
B. Kiki - Brought a smart watch  
C. TerryAnn - Brought a newspaper  
D. Tom - Brought an Ipad



**KENYA PRIMARY SCHOOL EDUCATION ASSESSMENT (KPSEA)**

**MONITORING LEARNERS PROGRESS**

**GRADE SIX - YEAR 2025**

**AGRI-NUTRITION**

*Time: 1HR 40 minutes*

1. Grade 6 learner was asked by her Agriculture & Nutrition teacher to state three products that we can get from the domestic animals. Which product did he not name?

A. Corn flour                      B. Milk  
C. Cheese                          D. Meat

2. Which one of the following crops can not be established through direct sowing?

A. Maize                          B. Spinach  
C. Wheat                          D. Millet

3. The diagram below shows a farm tool used in the farm.



What is the main use of the above tools?

A. Prunning of the crops  
B. For weeding the crops  
C. For spraying the crops  
D. For watering crops in the farm

4. Which one of the following is NOT a climbing fruit?

A. Kiwi                          B. Passion  
C. Avocado                      D. Strawberry

5. The following are the factors that one should consider when buying the shoes for pre-teens / pre-adolescents. Which one is not?

A. Comfortability  
B. Size of the shoes  
C. The month of the year  
D. Colour of the shoes.

6. The following are some of the nutritional disorders that a Grade 6 learner can easily suffer from **EXCEPT** one. Which is it?

A. Scurvy                      B. Goitre  
C. Malaria                      D. Rickets

7. What is the main cause of Goitre?

A. Lack of vitamin D  
B. Lack of vitamin C  
C. Lack of iodine in the body  
D. Lack of enough protein

8. Dedan grows spinach in his kitchen garden. The spinach he grows is a source of

A. Vitamins                      B. Carbohydrates  
C. Proteins                      D. Fats and oils

9. A grade 5 learner from Lwak Primary school had the following sign and symptoms of nutritional deficiency diseases;

- *Delayed crawling and walking*  
- *Bow legs*  
- *Weak muscles*

The learner was likely to be suffering from \_\_\_\_\_

A. Goitre                      B. Scurvy  
C. Marasmus                      D. Rickets

10. Chemicals that are used to control weeds and herbs is called

A. Acaricides                      B. Herbicides  
C. Pesticides                      D. Insecticides

11. We eat the \_\_\_\_\_ of tomatoes

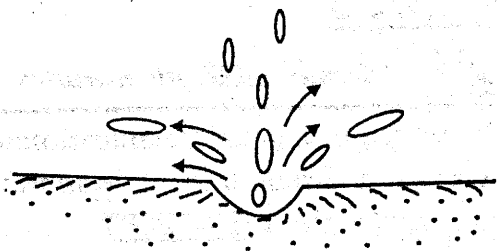
A. fruits B. roots C. leaves D. stems

12. \_\_\_\_\_ is the process of removing excess seedlings in the seedbed or nurserybed to prevent overcrowding.



- A. Gapping      B. Thinning  
C. Weeding      D. pruning

13. The type of erosion drawn in the diagram below is called



- A. Gulley erosion    B. Splash erosion  
C. Sheet erosion    D. Rill erosion

14. Fragile utensils can be made of the following materials EXCEPT

- A. glass              B. earthenware  
C. metals            D. ceramic


15. The following are different cooking methods that a Grade 6 learner can use when cooking EXCEPT

- A. boiling method  
B. refrigeration method  
C. baking method  
D. shallow frying method

16. The following are the various uses of stitches on clothes. Which one is NOT?

- A. Joining two fabrics  
B. Repairing torn areas  
C. Decorating household garment  
D. To make the garment new

17. The best type of fuel to use in the cooking tool below is?



- A. Gas                  B. Kerosene  
C. Charcoal            D. Electricity

18. The BEST method of cooking potato chips is

- A. stewing            B. shallow frying  
C. deep frying        D. steaming

19. \_\_\_\_\_ are the chemicals used to control the insects.

- A. Acaricides          B. Herbicides  
C. Pesticides          D. Antibiotics

20. Which one of the following is not a cleaning item found at home?

- A. Broom              B. Jembe  
C. Dustpan            D. Dustbin

21. The following are the needlework tools that can be used by Grade 6 learners during the needlework lesson Which one is NOT?

- A. Needle              B. Thimble  
C. Handkerchief      D. Tape measure

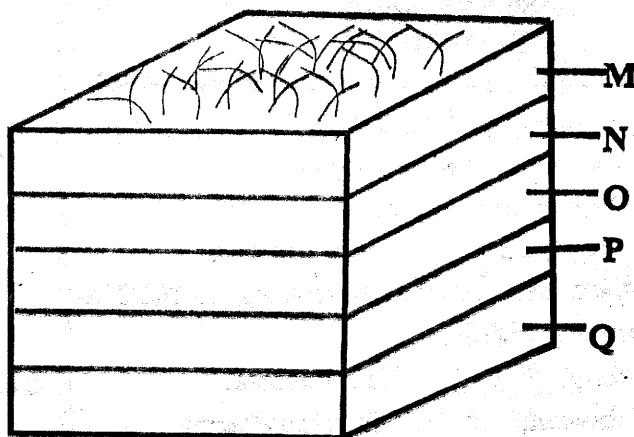
22. The following types of food can be cooked through shallow frying EXCEPT

- A. eggs                  B. sweet potatoes  
C. chapati              D. pancake

23. \_\_\_\_\_ are the type of food that protect us from getting the diseases.

- A. Carbohydrates    B. Proteins  
C. Mineral salts      D. Vitamins

When preparing the compost manure, learners from Harambee Primary School arranged the materials as shown below. Use it to answer question 24.



24. The materials labelled Q are likely to be

- A. soil                  B. kitchen waste  
C. dry grass            D. Ashes

25. \_\_\_\_\_ is the process used in Agriculture of removing unwanted and unproductive branches from the plants.

- A. Gapping            B. pruning  
C. Thinning            D. Hardening off



**KENYA PRIMARY SCHOOL EDUCATION ASSESSMENT (KPSEA)**  
**MONITORING LEARNERS PROGRESS**  
**GRADE SIX - TERM 1 YEAR 2025**  
**SOCIAL STUDIES & RELIGIOUS EDUCATION**

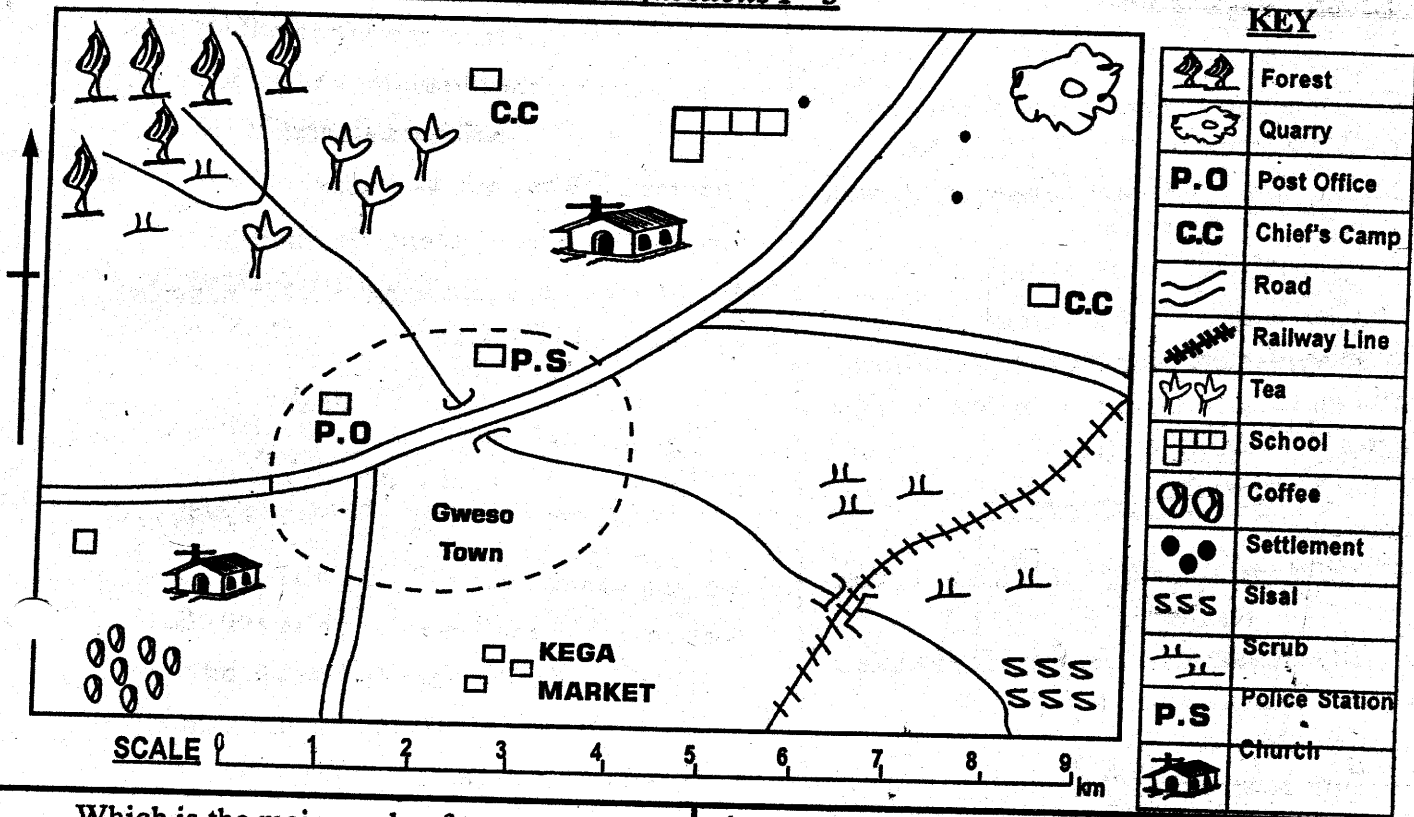
**READ THESE INSTRUCTIONS CAREFULLY**

1. Use an ordinary pencil only.
2. Make sure that you have written on the answer sheet  
 (i) YOUR NUMBER                      (ii) YOUR NAME                      (iii) NAME OF YOUR SCHOOL
3. When you have chosen your answer, mark it on the ANSWER SHEET, not in this question booklet.

*Time: 1HR 40 minutes*

**SOCIAL STUDIES**

*Study the map of BEBA AREA and answer questions 1 - 5*



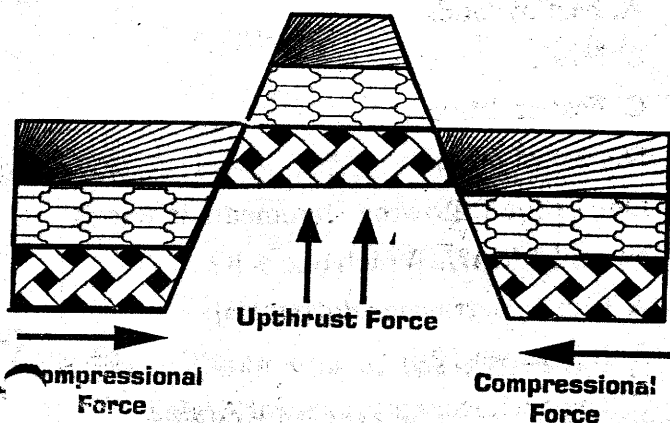
1. Which is the main mode of transport used in Beba Area?  
 A. Air                      B. Water  
 C. Road                      D. Railway
2. The administrative head of the Beba Area is likely to be ?  
 A. Senator  
 B. Chief  
 C. Governor  
 D. County Commissioner
3. The climate of the South Eastern part of Beba area is  
 A. hot and dry                      B. cool and wet  
 C. cool and dry                      D. hot and wet
4. Which is the main economic activity carried out in Beba Area?  
 A. Trading                      B. Mining  
 C. farming                      D. Tourism
5. River Peru flows from \_\_\_\_\_ to \_\_\_\_\_ direction.  
 A. North to South  
 B. North East to South West  
 C. South East to North East  
 D. North West to South East
6. The people of Beba area are likely to belong to which religion?  
 A. Islamic                      B. Christianity  
 C. Hindusim                      D. Traditionalism



7. The Mijikenda call their God  
A. Nyasaye                      B. Ngai  
C. Enkai                         D. Mulungu
8. In Kenya we have \_\_\_\_\_ Arms of the government.  
A. two                              B. three  
C. one                               D. six
9. A person who belongs to a particular country is a  
A. pagan                           B. citizen  
C. Squatter                       D. refugee
10. All schools in Kenya are under the Ministry of  
A. Transport  
B. Labour  
C. Education Science and Technology  
D. Ministry of Interior Cordination
11. \_\_\_\_\_ refers to the people's way of life.  
A. Tribalism                      B. Culture  
C. Community                   D. Family
12. Grade 6 learners were asked by their Social Studies teacher to state the members of the school Administration, among the following learners, who gave the correct answer?  
A. Milka - Headteacher, watchman, Senior teacher  
B. Jelly - Headteacher, Deputy Headteacher, Senior teacher  
C. Ken - Headteacher, Teacher, Cooks  
D. Tim - Headteacher, Deputy Headteacher and ground's man
13. The country that borders Kenya to the North West is likely to be  
A. Ethiopia                        B. Tanzania  
C. Uganda                          D. South Sudan
14. Kenya can maintain good relationship with her neighbours through the following ways EXCEPT  
A. through trade  
B. through games and sports  
C. through use of common languages  
D. through boarder disputes
15. Grade 6 learners were discussing about the elements of weather. Which element did they not discuss  
A. Rivers                           B. Rainfall  
C. Wind                            D. Temperature
16. The following are the types of crops grown through horticulture. Which one is NOT?  
A. Flowers                         B. Fruits  
C. Vegetables                    D. Cereals
17. Which one of the following group of people belongs to the plain Nilotes only.  
A. Luo, Iteso, Giriama  
B. Maasai, Turkana, Samburu  
C. Kikuyu, Maasai, Jemps  
D. Rendille, Pokomo, Samburu
18. In Kenya inland fishing can be practiced in the following areas EXCEPT  
A. rivers                            B. dams  
C. ponds                            D. oceans
19. The following are the National symbols of unity. Which one is NOT?  
A. National Flag                B. The Public Seal  
C. Coat of Arms                D. The Church
20. In Kenya general elections are held after every  
A. 5 years                          B. 10 years  
C. 25 years                        D. 3 years
21. Which country in Eastern Africa has got its capital at Asmara?  
A. Ethiopia                        B. Eritrea  
C. Rwanda                         D. Somalia
22. Which one of the following is NOT a relief feature in Eastern Africa?  
A. Valleys                          B. Plateau  
C. Oceans                          D. Plains



*The diagram below was drawn by a Grade 6 learner during the discussion of Social Studies. Use the diagram to answer questions 23 - 24.*



23. What were the learners discussing about?
  - A. The formation of Rift Valley
  - B. The formation of block mountain
  - C. The formation of salty water lakes
  - D. The formation of lava dammed lakes
24. The other name given to the formation of the above feature is called
  - A. volcanic mountain
  - B. horst mountain
  - C. crater lake
  - D. Rift Valley
25. Serengeti, Lotikipi and Bileshe have got one thing in common. Which one is it?
  - A. They are all block mountains
  - B. They are all volcanic mountains
  - C. They are all seasonal rivers
  - D. They are all plains

## SECTION II - C.R.E

26. God created everything for
  - A. being disobedient
  - B. a purpose
  - C. being unfaithful
  - D. making the world look good
27. How long did the creation took place?
  - A. 6 days
  - B. 7 days
  - C. 3 days
  - D. 10 days
28. The brother of Joseph the dreamer was
  - A. Isaac
  - B. Benjamin
  - C. Esau
  - D. Moses

29. When God appeared to Moses at Mt. Sinai, God was inform of
  - A. rain
  - B. fire
  - C. clouds
  - D. spirit
30. The following are the effects of a child labour. Which one is NOT?
  - A. It brings stress
  - B. It raises self esteem
  - C. It lowers self esteem
  - D. It leads to poor growth
31. Grade 6 learners were discussing the first five books of the Old Testament. Which one of the following book did they not mention?
  - A. Genesis
  - B. Exodus
  - C. Acts of Apostles
  - D. Leviticus
32. \_\_\_\_\_ was instructed by God to build an ark.
  - A. Abraham
  - B. Noah
  - C. Moses
  - D. Adam
33. The first disciples to be called and follow Jesus worked as
  - A. farmers
  - B. priests
  - C. fishermen
  - D. teachers
34. \_\_\_\_\_ was the son of Noah who saw his father's nakedness.
  - A. Shem
  - B. Ham
  - C. Japheth
  - D. Cain
35. Grade 6 learners were asked by their teacher to state the values that were taught by John the Baptist. Which value did they not state ?
  - A. Honesty
  - B. Kindness
  - C. Responsibilities
  - D. Hatred



36. Grade 6 learners were asked by their C.R.E teacher to state the fruits of the Holy Spirit. Who did not state the correct fruit?
- A. Musau - Peace  
B. Kiptoo - Joy  
C. Naserian - Performing miracles  
D. Cheptoo - Self control
37. From the Bible, we learn that where you go I will go, your people will be my people. These words were said by
- A. Sarah B. Naomi  
C. Mary D. Ruth
38. Who among the following disciples did not witness the resurrection of Christ?
- A. John B. Judas Iscariot  
C. Peter D. James
39. The following are qualities of a good friend EXCEPT one. Which one is it?
- A. Caring B. Jelous  
C. Loving D. Respectful
40. The beginning of a new life in Christianity is marked by
- A. Baptism  
B. Birth  
C. Holy Communion  
D. Circumcision

### SECTION II - I.R.E

26. Bathing before attending *Juma* prayers is compulsory for
- A. Men  
B. Children  
C. Women  
D. The aged
27. Which of the following pillars of *Salaat* is EXEMPTED for the crippled Muslims?
- A. *Qiyam*  
B. *Julus*  
C. *Takbiraful Ihraam*  
D. *Taslim*
28. Which one of the following is a ritual of *Umrah*?
- A. Stoning jamat  
B. Visiting Arafat  
C. Performing twawaf
29. Which one of the following form of fast was done by Mariam bunt *Imram* immediately after giving birth to Issa?
- A. Fast of foods  
B. Fast of speech  
C. Fast of drinks  
D. Fast of meat
30. One of the following statements is wrong about *UMRAH*. Which one is it?
- A. Can be performed during Hajj  
B. It is lesser Hajj  
C. The performer must stay at Arafaa  
D. Can be combined with the main Hajj
31. Which battle had the fewest number of Muslims in the army who emerged victoriously?
- A. *Badr* B. *Uhud*  
C. *Khandak* D. *Khaybar*
32. Which one is true on *Swalatul Kusuf*?
- A. It has no two *rukuus*  
B. It has two *rakaas*  
C. It is said just like any *Sunnah* prayers  
D. It is said for the eclipse of the moon
33. Who among these is not a recipient of *Zakaat*?
- A. *Fil-Riqab* B. *Al-Masakin*  
C. *Ibu-Sabil* D. *Al-Yatim*
34. The place of worship that is *correctly matched* is
- A. Shrine - Christians  
B. Church - Muslims  
C. Mosque - Pagans  
D. Temple - Hindus
35. "*Lam Yaqumi Lladhina Kararun* ..... " is a beginning verse of surah
- A. *Bayyina* B. *Zilzala*  
C. *Kaafirun* D. *Qadar*